



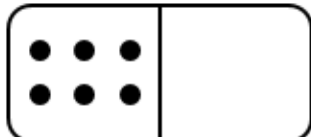
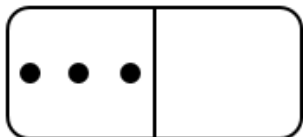


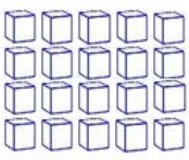
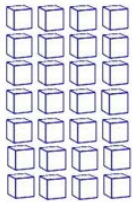


Name: _____

My Math Homework - Q1:1

Date: _____





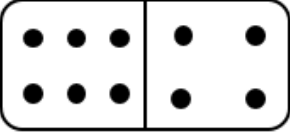



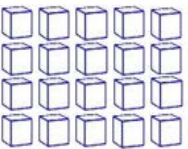
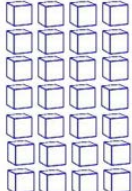
Monday	Tuesday	Wednesday	Thursday
<p>How many apples do you see?</p> <p>_____</p> 	<p>How many cars do you see?</p> <p>_____</p> 	<p>How many stars do you see?</p> <p>_____</p> 	<p>How many pencils do you see?</p> <p>_____</p> 
<p>Circle the LARGEST number.</p> <p>2 7</p>	<p>Circle the SMALLEST number.</p> <p>6 5</p>	<p>Circle the LARGEST number.</p> <p>9 1</p>	<p>Circle the SMALLEST number.</p> <p>10 8</p>
<p>Draw enough dots to make 10.</p> 	<p>What two numbers make 10?</p> <p>5 + _____</p>	<p>Draw enough dots to make 10.</p> 	<p>What two numbers make 10?</p> <p>_____ + 2</p>
<p>Add the numbers.</p> <p>5 + 2 = _____</p>	<p>Add the butterflies.</p>  <p>_____</p>	<p>Subtract the numbers.</p> <p>6 - 3 = _____</p>	<p>Subtract the butterflies.</p>  <p>_____</p>
<p>Randy has 3 packs of gum. He buys 4 more. How many does he have now?</p> <p>_____ + _____ = _____</p>	<p>Mary had 8 grapes for her snack. She ate 4 of them. How many does she have left?</p> <p>_____ - _____ = _____</p>	<p>Ian planted 2 roses, and 4 daisies. How many flowers did he plant?</p> <p>_____ + _____ = _____</p>	<p>Katy baked 10 cookies. She gave 6 to her sisters. How many are left?</p> <p>_____ - _____ = _____</p>
<p>How many objects do you see?</p>  <p>_____</p>	<p>Fill in the missing number.</p> <p>20, 21, 22, _____, 24</p> <p>32, 33, _____, 35, 36</p>	<p>How many objects do you see?</p>  <p>_____</p>	<p>Fill in the missing number.</p> <p>48, 49, 50, _____, 52</p> <p>73, 74, _____, 76, 77</p>

My Work

Monday	Tuesday
Wednesday	Thursday

My Progress

MONDAY Out of _____ questions, I got _____ correct.	TUESDAY Out of _____ questions, I got _____ correct.	WEDNESDAY Out of _____ questions, I got _____ correct.	THURSDAY Out of _____ questions, I got _____ correct.
--	---	---	--

Monday	Tuesday	Wednesday	Thursday
<p>How many apples do you see?</p> <p>8</p> 	<p>How many cars do you see?</p> <p>15</p> 	<p>How many stars do you see?</p> <p>9</p> 	<p>How many pencils do you see?</p> <p>20</p> 
<p>Circle the LARGEST number.</p> <p>2 7</p>	<p>Circle the SMALLEST number.</p> <p>6 5</p>	<p>Circle the LARGEST number.</p> <p>9 1</p>	<p>Circle the SMALLEST number.</p> <p>10 8</p>
<p>Draw enough dots to make 10.</p> 	<p>What two numbers make 10?</p> <p>5 + 5</p>	<p>Draw enough dots to make 10.</p> 	<p>What two numbers make 10?</p> <p>8 + 2</p>
<p>Add the numbers.</p> <p>5 + 2 = 7</p>	<p>Add the butterflies.</p>  <p>5</p>	<p>Subtract the numbers.</p> <p>6 - 3 = 3</p>	<p>Subtract the butterflies.</p>  <p>3</p>
<p>Randy has 3 packs of gum. He buys 4 more. How many does he have now?</p> <p>3 + 4 = 7</p>	<p>Mary had 8 grapes for her snack. She ate 4 of them. How many does she have left?</p> <p>8 - 4 = 4</p>	<p>Ian planted 2 roses, and 4 daisies. How many flowers did he plant?</p> <p>2 + 4 = 6</p>	<p>Katy baked 10 cookies. She gave 6 to her sisters. How many are left?</p> <p>10 - 6 = 4</p>
<p>How many objects do you see?</p>  <p>20</p>	<p>Fill in the missing number.</p> <p>20, 21, 22, 23, 24</p> <p>32, 33, 34, 35, 36</p>	<p>How many objects do you see?</p>  <p>28</p>	<p>Fill in the missing number.</p> <p>48, 49, 50, 51, 52</p> <p>73, 74, 75, 76, 77</p>