

Name: \_\_\_\_\_

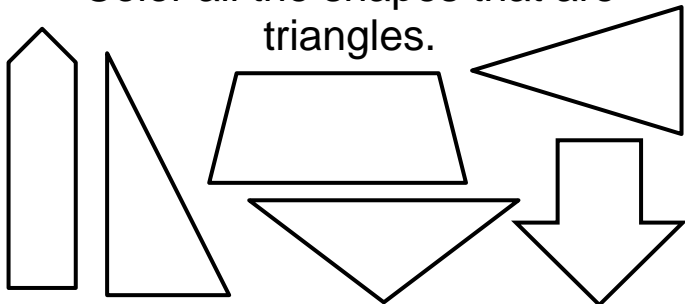
My Math Homework - Q4:5

Week of: \_\_\_\_\_

Monday	Tuesday
<p>Draw a shape with 6 sides.</p>	<p>Name the shape.</p> <div data-bbox="1360 226 1490 373" data-label="Image"> </div> <hr/> <hr/>
<p>Which group has less?</p> <div data-bbox="102 615 451 730" data-label="Image"> </div> <div data-bbox="508 615 789 730" data-label="Image"> </div>	<p>Fill in the missing numbers.</p> <div data-bbox="841 583 1523 766" data-label="Figure"> </div>
<p>Katie got 4 grapes and 4 strawberries for her snack. How many pieces of fruit does she have in all?</p>	<p>Draw enough dots to make 10.</p> <div data-bbox="833 877 1146 1018" data-label="Image"> </div> <div data-bbox="1206 877 1520 1018" data-label="Image"> </div>
<p>Add the numbers.</p> <p><math>0 + 3 = \underline{\quad}</math></p> <p><math>2 + 3 = \underline{\quad}</math></p>	<p>Subtract the numbers.</p> <p><math>2 - 1 = \underline{\quad}</math></p> <p><math>5 - 3 = \underline{\quad}</math></p>
<p>Which object is longer?</p> <div data-bbox="207 1371 686 1407" data-label="Image"> </div> <div data-bbox="207 1564 535 1596" data-label="Image"> </div>	<p>Which object is shorter?</p> <div data-bbox="1052 1396 1101 1623" data-label="Image"> </div> <div data-bbox="1230 1367 1287 1627" data-label="Image"> </div>
<p>Which object is heavier?</p> <div data-bbox="191 1701 423 1944" data-label="Image"> </div> <div data-bbox="516 1711 699 1944" data-label="Image"> </div>	<p>Which object holds more?</p> <div data-bbox="1003 1728 1109 1953" data-label="Image"> </div> <div data-bbox="1162 1686 1344 1953" data-label="Image"> </div>

## Wednesday

Color all the shapes that are triangles.



Fill in the missing number?

$$10 + \underline{\quad\quad} = 16$$

There are 9 pieces of paper. 4 of the pieces get thrown away. How many pieces of paper are left?

Add the numbers.

$$5 + 0 = \underline{\quad\quad}$$

$$1 + 1 = \underline{\quad\quad}$$

Which object is shorter?



Which object is lighter?



## Thursday

Is the shape flat or solid?



Circle the correct words.

8 is greater than  
is less than  
is equal to

9

Draw enough dots to make 9 on each domino.



Subtract the numbers.

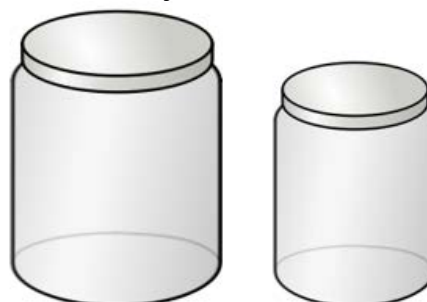
$$3 - 3 = \underline{\quad\quad}$$

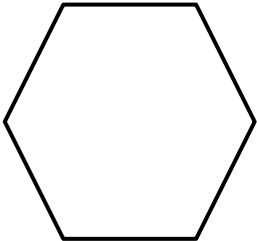


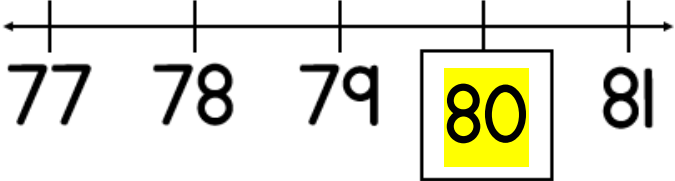



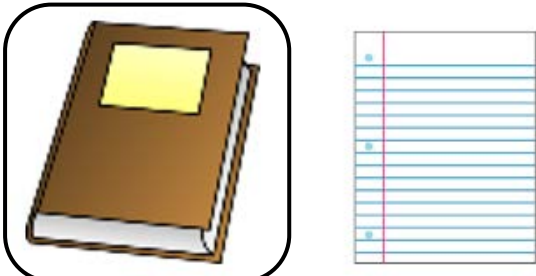
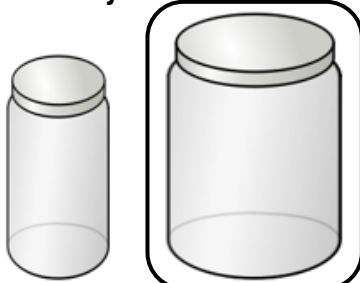
$$4 - 3 = \underline{\quad\quad}$$

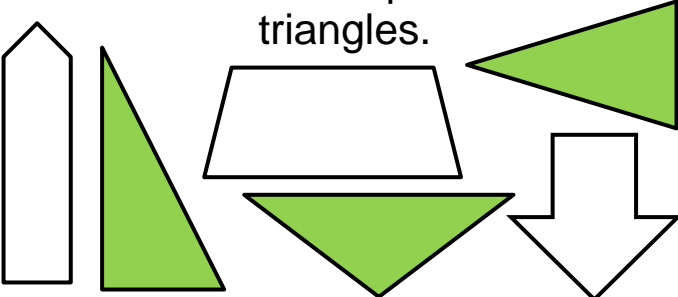





Which object is taller?



Which object holds less?



Monday	Tuesday
<p>Draw a shape with 6 sides.</p> 	<p>Name the shape.</p>  <p><b>Cone</b></p>
<p>Which group has less?</p> 	<p>Fill in the missing numbers.</p> 
<p>Katie got 4 grapes and 4 strawberries for her snack. How many pieces of fruit does she have in all?</p> <p><b>8</b></p>	<p>Draw enough dots to make 10.</p> 
<p>Add the numbers.</p> $0 + 3 = \mathbf{3}$ $2 + 3 = \mathbf{5}$	<p>Subtract the numbers.</p> $2 - 1 = \mathbf{1}$ $5 - 3 = \mathbf{2}$
<p>Which object is longer?</p> 	<p>Which object is shorter?</p> 
<p>Which object is heavier?</p> 	<p>Which object holds more?</p> 

Wednesday	Thursday
<p>Color all the shapes that are triangles.</p> 	<p>Is the shape flat or solid?</p> <p><b>Solid</b></p> 
<p>Fill in the missing number?</p> $10 + \underline{6} = 16$	<p>Circle the correct words.</p> <p>8 is greater than is less than 9 is equal to</p>
<p>There are 9 pieces of paper. 4 of the pieces get thrown away. How many pieces of paper are left?</p> <p><b>5</b></p>	<p>Draw enough dots to make 9 on each domino.</p> 
<p>Add the numbers.</p> $5 + 0 = 5$ $1 + 1 = 2$	<p>Subtract the numbers.</p> $3 - 3 = 0$ $4 - 3 = 1$
<p>Which object is shorter?</p> 	<p>Which object is taller?</p> 
<p>Which object is lighter?</p> 	<p>Which object holds less?</p> 