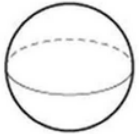

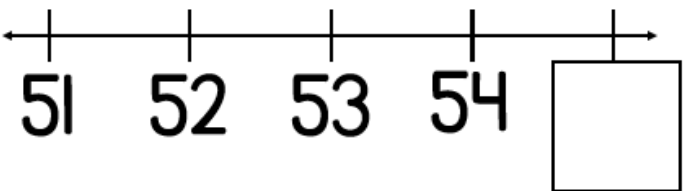


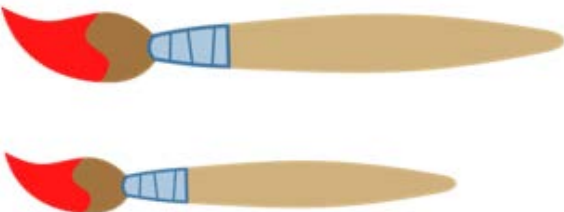





Name:

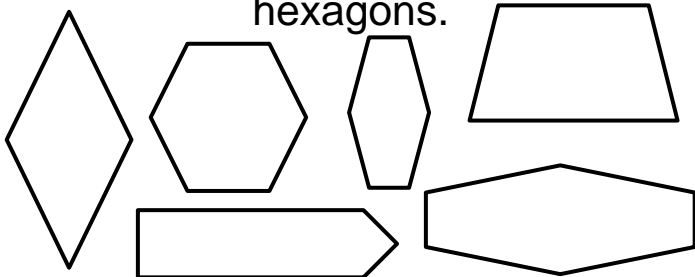
My Math Homework - Q4:4

Week of:

Monday	Tuesday
<p>Draw a shape with 3 sides.</p>	<p>Name the shape.</p> 
<p>Which group has more?</p> 	<p>Fill in the missing numbers.</p> 
<p>Jacob had a box of 8 crayons. He gave his friend 2 of his crayons. How many does he have left?</p>	<p>Draw enough dots to make 10.</p> 
<p>Which string is longer?</p> 	<p>Subtract the numbers.</p> $4 - 4 = \underline{\quad}$ $3 - 1 = \underline{\quad}$
<p>Which object is shorter?</p> 	<p>Which object is heavier?</p> 
<p>Which object holds more?</p> 	<p>Which object holds less?</p> 

Wednesday

Color all the shapes that are hexagons.



Fill in the missing number?

$$10 + \underline{\quad\quad} = 18$$

There are 3 white dogs, and 4 brown dogs at the park. How many dogs are there altogether?

Which string is shorter?



Which object is taller?

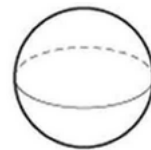


Which object holds more?



Thursday


Is the shape flat or solid?



Circle the correct words.

4 is greater than 2
is less than
is equal to

Draw enough dots to make 7 on each domino.




Add the numbers.

$$3 + 1 = \underline{\quad\quad}$$

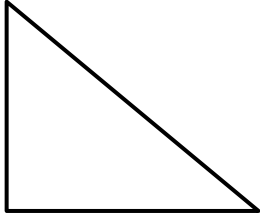
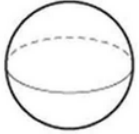

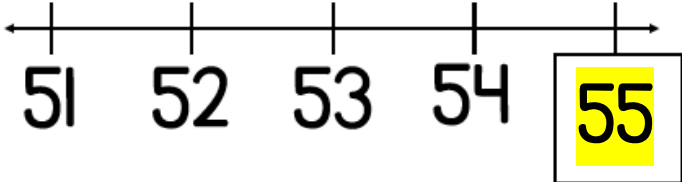


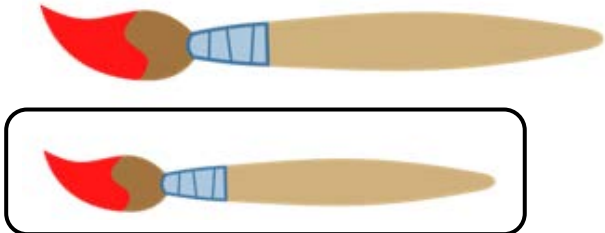



$$4 + 0 = \underline{\quad\quad}$$

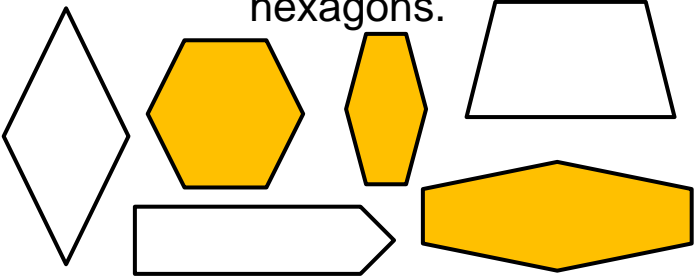
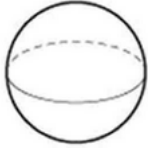





Which object is lighter?



Which object holds less?



Monday	Tuesday
<p>Draw a shape with 3 sides.</p> 	<p>Name the shape.</p>  <p>Sphere</p>
<p>Which group has more?</p> 	<p>Fill in the missing numbers.</p> 
<p>Jacob had a box of 8 crayons. He gave his friend 2 of his crayons. How many does he have left?</p> <p>6</p>	<p>Draw enough dots to make 10.</p> 
<p>Which string is longer?</p> 	<p>Subtract the numbers.</p> $4 - 4 = 0$ $3 - 1 = 2$
<p>Which object is shorter?</p> 	<p>Which object is heavier?</p> 
<p>Which object holds more?</p> 	<p>Which object holds less?</p> 

Wednesday	Thursday
<p>Color all the shapes that are hexagons.</p> 	<p>Is the shape flat or solid?</p>  <p>Solid</p>
<p>Fill in the missing number?</p> $10 + \underline{8} = 18$	<p>Circle the correct words.</p> <p>4 is greater than 2</p> <p>is less than</p> <p>is equal to</p>
<p>There are 3 white dogs, and 4 brown dogs at the park. How many dogs are there altogether?</p> <p>7</p>	<p>Draw enough dots to make 7 on each domino.</p> 
<p>Which string is shorter?</p> 	<p>Add the numbers.</p> $3 + 1 = \underline{4}$ $4 + 0 = \underline{4}$
<p>Which object is taller?</p> 	<p>Which object is lighter?</p> 
<p>Which object holds more?</p> 	<p>Which object holds less?</p> 