

Name:

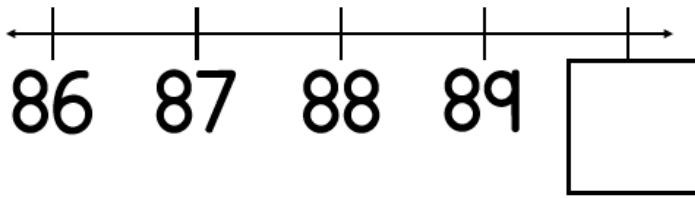
My Math Homework - Q4:3

Week of:

Monday

Draw a shape with 4 corners.

Fill in the missing numbers.



Which group has more?



There are 2 red birds and 3 green birds in a tree. How many birds are there altogether?

Which string is longer?

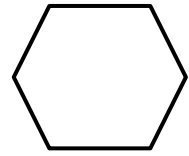


Which object is heavier?



Tuesday

Name the shape.



How many?




Circle the correct words.

9

is greater than
is less than
is equal to

4

Draw enough dots to make 10.



Subtract the numbers.

$$5 - 1 = \underline{\quad}$$

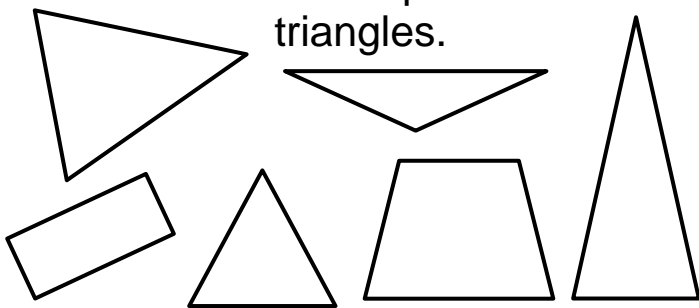
$$4 - 3 = \underline{\quad}$$

Which object is lighter?

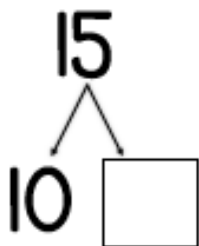


Wednesday

Color all the shapes that are triangles.



What two numbers make 15?



Which group has less?



There are 7 blue birds in a tree. 5 of them flew away. How many birds are left in the tree?

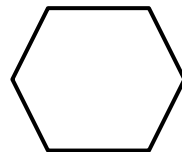
Which string is shorter?



Which object is heavier?

**Thursday**

Is the shape flat or solid?



Fill in the missing number?

$$10 + \underline{\quad} = 12$$

Circle the correct words.

6

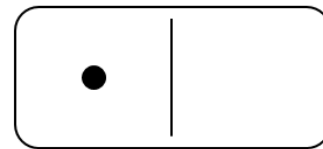
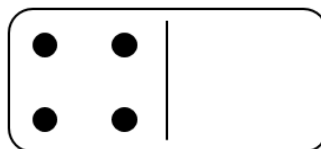
is greater than

is less than

is equal to

6

Draw enough dots to make 5 on each domino.




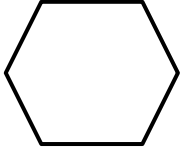
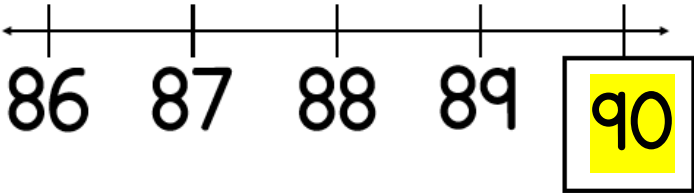






Add the numbers.

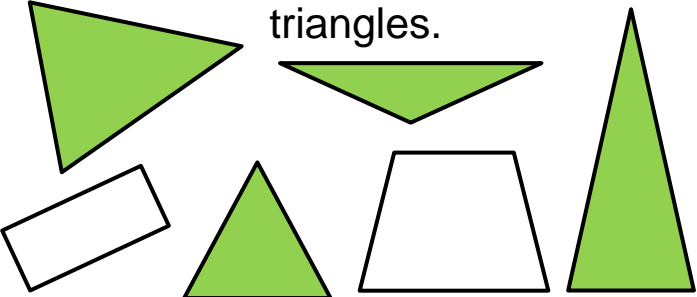
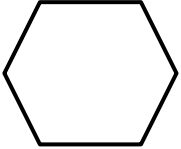
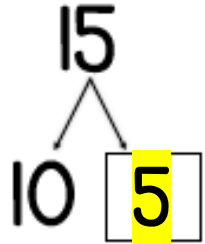




$$1 + 4 = \underline{\quad}$$

$$2 + 3 = \underline{\quad}$$

Which object is lighter?



Monday	Tuesday
<p>Draw a shape with 4 corners.</p> 	<p>Name the shape.</p>  <p>Hexagon</p>
<p>Fill in the missing numbers.</p> 	<p>How many?</p>  <p>7</p>
<p>Which group has more?</p> 	<p>Circle the correct words.</p> <p>9 is greater than 4</p> <p>is less than</p> <p>is equal to</p>
<p>There are 2 red birds and 3 green birds in a tree. How many birds are there altogether?</p> <p>5</p>	<p>Draw enough dots to make 10.</p> 
<p>Which string is longer?</p> 	<p>Subtract the numbers.</p> <p>$5 - 1 = 4$</p> <p>$4 - 3 = 1$</p>
<p>Which object is heavier?</p> 	<p>Which object is lighter?</p> 

Wednesday	Thursday
<p>Color all the shapes that are triangles.</p> 	<p>Is the shape flat or solid?</p>  <p>Flat</p>
<p>What two numbers make 15?</p> 	<p>Fill in the missing number?</p> $10 + \underline{2} = 12$
<p>Which group has less?</p> 	<p>Circle the correct words.</p> <p>6 is greater than 6</p> <p>6 is less than 6</p> <p>6 is equal to 6</p>
<p>There are 7 blue birds in a tree. 5 of them flew away. How many birds are left in the tree?</p> <p>2</p>	<p>Draw enough dots to make 5 on each domino.</p> 
<p>Which string is shorter?</p> 	<p>Add the numbers.</p> $1 + 4 = \underline{5}$ $2 + 3 = \underline{5}$
<p>Which object is heavier?</p> 	<p>Which object is lighter?</p> 