

Name: \_\_\_\_\_

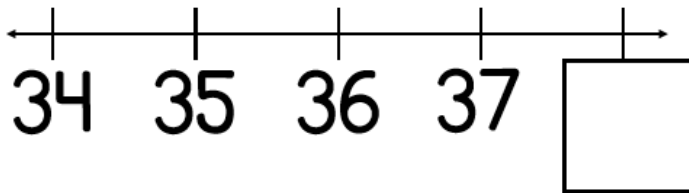
My Math Homework - Q4:2

Week of: \_\_\_\_\_


## Monday

Draw a shape with 4 equal sides.

Fill in the missing numbers.



Which group has more?



Emma has 10 beads on her necklace. 4 of them fell off. How many beads are left?

Add the numbers.

$$2 + 3 = \underline{\quad}$$

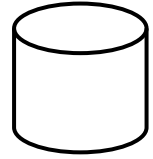
$$1 + 3 = \underline{\quad}$$

Which shoe is longer?




## Tuesday

Name the shape.



How many?



Circle the correct words.

3

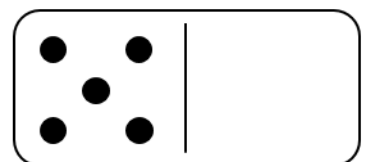
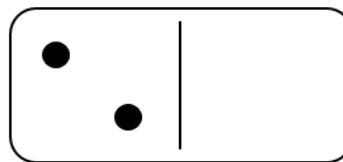
is greater than

is less than

is equal to

3

Draw enough dots to make 10.



Subtract the numbers.

$$4 - 3 = \underline{\quad}$$

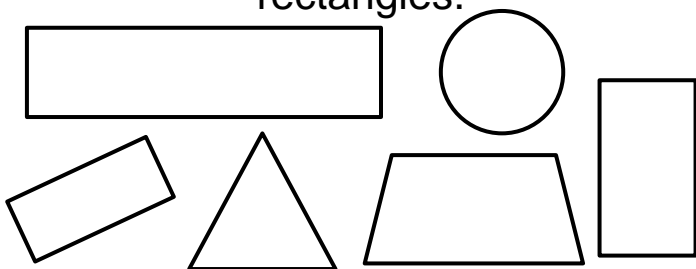
$$1 - 1 = \underline{\quad}$$

Which pencil is shorter?

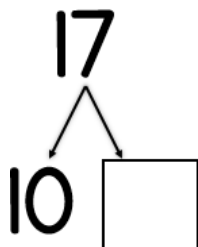


**Wednesday**


Color all the shapes that are rectangles.



What two numbers make 17?



Which group has less?




Brian has 3 toy cars, and Emma has 4 toy cars. How many toy cars do they have altogether?

Add the numbers.


$$2 + 0 = \underline{\quad}$$

$$4 + 1 = \underline{\quad}$$

Which tree is taller?

**Thursday**

Is the shape flat or solid?



Fill in the missing number?

$$10 + \underline{\quad} = 11$$

Circle the correct words.

4 is greater than 7  
is less than  
is equal to

Draw enough dots to make 8 on each domino.




Subtract the numbers.

$$3 - 2 = \underline{\quad}$$


$$4 - 2 = \underline{\quad}$$

Which child is shorter?

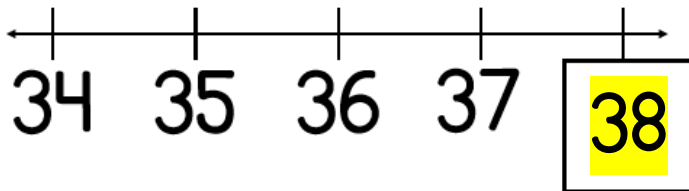


## Monday


Draw a shape with 4 equal sides.



Fill in the missing numbers.



Which group has more?



Emma has 10 beads on her necklace. 4 of them fell off. How many beads are left?

**6**

Add the numbers.

$$2 + 3 = \mathbf{5}$$

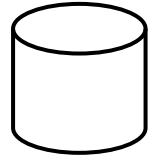
$$1 + 3 = \mathbf{4}$$

Which shoe is longer?




## Tuesday

Name the shape.



**Cylinder**

How many?



Circle the correct words.

**3**


is greater than

is less than

**is equal to**

**3**

Draw enough dots to make 10.




Subtract the numbers.

$$4 - 3 = \mathbf{1}$$

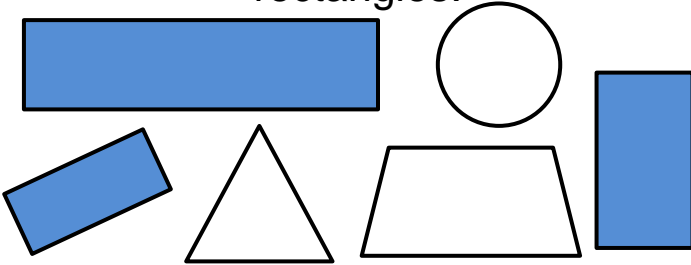
$$1 - 1 = \mathbf{0}$$

Which pencil is shorter?

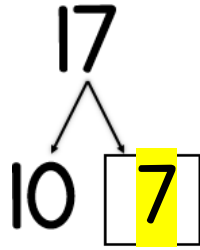


## Wednesday



Color all the shapes that are rectangles.



What two numbers make 17?



Which group has less?



Brian has 3 toy cars, and Emma has 4 toy cars. How many toy cars do they have altogether?


7

Add the numbers.

$$2 + 0 = 2$$

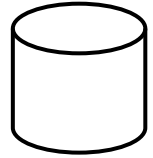
$$4 + 1 = 5$$

Which tree is taller?



## Thursday

Is the shape flat or solid?



Solid

Fill in the missing number?

$$10 + \underline{7} = 17$$

Circle the correct words.

4

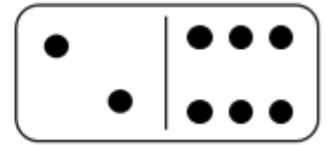

is greater than

is less than

is equal to

7

Draw enough dots to make 8 on each domino.



Subtract the numbers.

$$3 - 2 = 1$$

$$4 - 2 = 2$$

Which child is shorter?

