

Name:

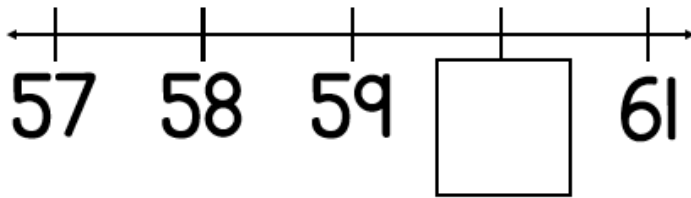
My Math Homework - Q4:1

Week of:

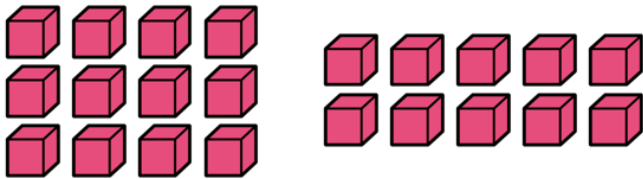
**Monday**

Draw a shape with 3 sides and 3 corners.

Fill in the missing numbers.



Which group has more?



There are 5 juice boxes. Some kids drink 3 of the juice boxes. How many juice boxes are left?

Add the numbers.

$$4 + 0 = \underline{\quad}$$

$$3 + 2 = \underline{\quad}$$


Circle the word that best describes a feather.



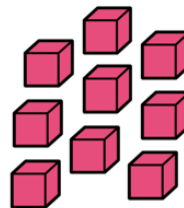
Heavy      Light

**Tuesday**

Name the shape.



How many?



Circle the correct words.

9

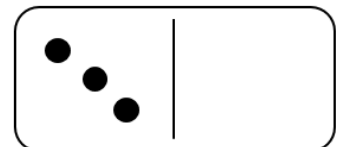

is greater than

is less than

is equal to

6

Draw enough dots to make 10.



Subtract the numbers.



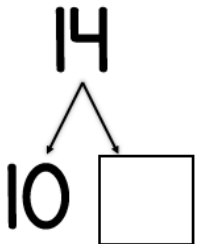
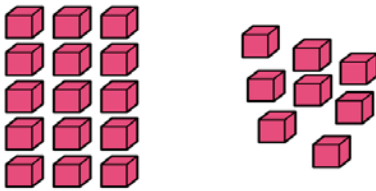
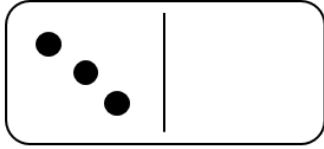
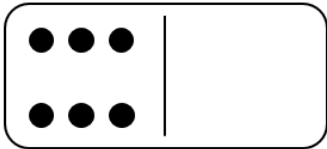


$$5 - 1 = \underline{\quad}$$

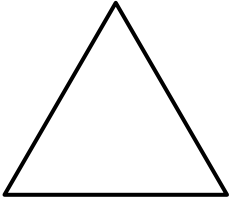

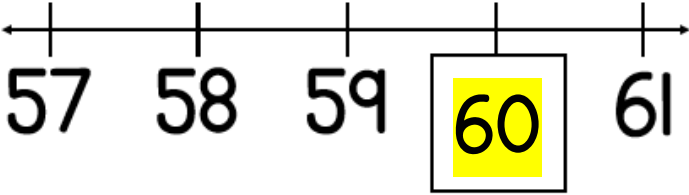
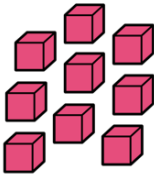
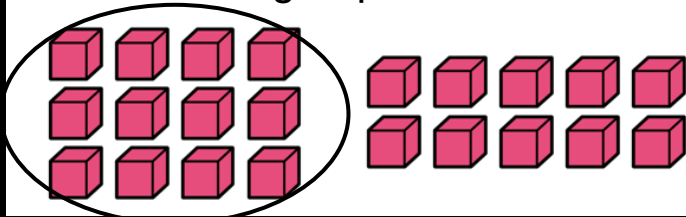
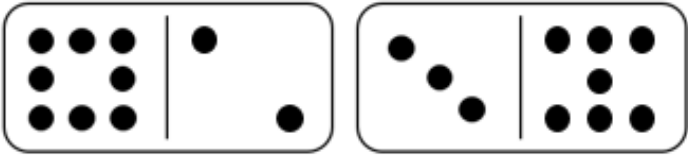


$$3 - 2 = \underline{\quad}$$

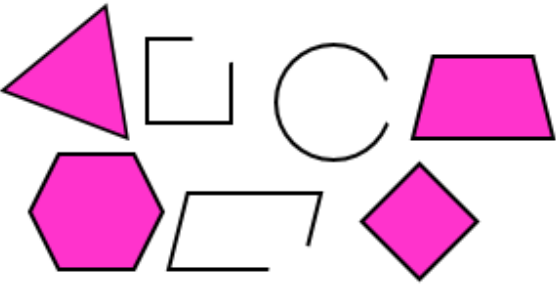

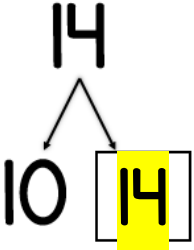
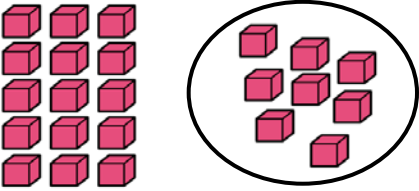



Circle the word that best describes a broom.



Long      Short

Wednesday	Thursday
<p>Color all the shapes that are closed.</p> 	<p>Is the shape flat or solid?</p>  <hr/> <hr/> <hr/>
<p>What two numbers make 14?</p> 	<p>Fill in the missing number?</p> $10 + \underline{\hspace{2cm}} = 19$
<p>Which group has less?</p> 	<p>Circle the correct words.</p> <div style="display: flex; align-items: center; justify-content: space-around;"> <div style="text-align: center;"> <p>0</p> <p>is greater than</p> <p>is less than</p> <p>is equal to</p> </div> <div style="text-align: center;"> <p>4</p> </div> </div>
<p>Amy has 6 pieces of candy. She gets 4 more pieces. How many pieces of candy does she have now?</p>	<p>Draw enough dots to make 7 on each domino.</p> <div style="display: flex; justify-content: space-around;">   </div>
<p>Add the numbers.</p> $1 + 3 = \underline{\hspace{2cm}}$ $2 + 2 = \underline{\hspace{2cm}}$	<p>Subtract the numbers.</p> $2 - 1 = \underline{\hspace{2cm}}$ $5 - 4 = \underline{\hspace{2cm}}$
<p>Circle the word that best describes a car.</p>  <div style="display: flex; justify-content: center; gap: 50px; margin-top: 20px;"> <span>Heavy</span> <span>Light</span> </div>	<p>Circle the word that best describes a paperclip.</p>  <div style="display: flex; justify-content: center; gap: 50px; margin-top: 20px;"> <span>Long</span> <span>Short</span> </div>

Monday	Tuesday
<p>Draw a shape with 3 sides and 3 corners.</p> 	<p>Name the shape.</p>  <p><b>Square</b></p>
<p>Fill in the missing numbers.</p> 	<p>How many?</p>  <p><b>9</b></p>
<p>Which group has more?</p> 	<p>Circle the correct words.</p> <p><b>9</b> <b>is greater than</b> <b>6</b></p> <p>is less than</p> <p>is equal to</p>
<p>There are 5 juice boxes. Some kids drink 3 of the juice boxes. How many juice boxes are left?</p> <p><b>2</b></p>	<p>Draw enough dots to make 10.</p> 
<p>Add the numbers.</p> <p><math>4 + 0 = 4</math></p> <p><math>3 + 2 = 5</math></p>	<p>Subtract the numbers.</p> <p><math>5 - 1 = 4</math></p> <p><math>3 - 2 = 1</math></p>
<p>Circle the word that best describes a feather.</p>  <p><b>Heavy</b> <b>Light</b></p>	<p>Circle the word that best describes a broom.</p>  <p><b>Long</b> <b>Short</b></p>

Wednesday	Thursday
<p>Color all the shapes that are closed.</p> 	<p>Is the shape flat or solid?</p>  <p><b>Flat</b></p>
<p>What two numbers make 14?</p> 	<p>Fill in the missing number?</p> $10 + \underline{9} = 19$
<p>Which group has less?</p> 	<p>Circle the correct words.</p> <p>0 is greater than 4</p> <p>0 <b>is less than</b> 4</p> <p>0 is equal to 4</p>
<p>Amy has 6 pieces of candy. She gets 4 more pieces. How many pieces of candy does she have now?</p> <p><b>10</b></p>	<p>Draw enough dots to make 7 on each domino.</p> 
<p>Add the numbers.</p> $1 + 3 = \underline{4}$ $2 + 2 = \underline{4}$	<p>Subtract the numbers.</p> $2 - 1 = \underline{1}$ $5 - 4 = \underline{1}$
<p>Circle the word that best describes the car.</p>  <p><b>Heavy</b>      Light</p>	<p>Circle the word that best describes the paperclip.</p>  <p>Long      <b>Short</b></p>