

Name:

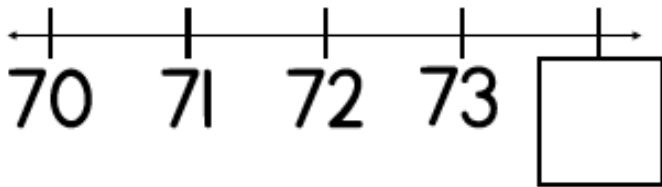
My Math Homework - Q3:9

Week of:

Monday

Draw a shape with 6 sides and 6 corners.

Fill in the missing numbers.

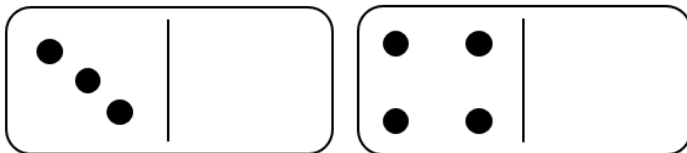


Which group has more?



There are 2 birds, and 5 fish. How many animals are there altogether?

Draw enough dots to make 5 on each domino.



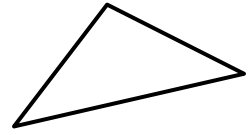
Add the numbers.

$$2 + 2 = \underline{\quad}$$

$$1 + 1 = \underline{\quad}$$

Tuesday

Name the shape.



How many?



Circle the correct words.

7

is greater than

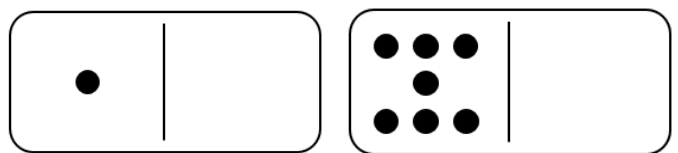
is less than

is equal to

7

There are 8 pieces of pizza. 5 of them are eaten. How many are left?

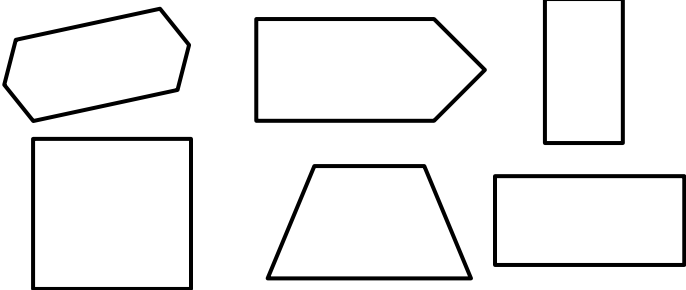
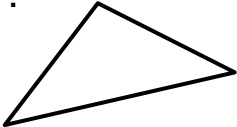
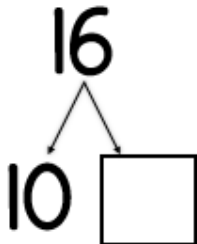


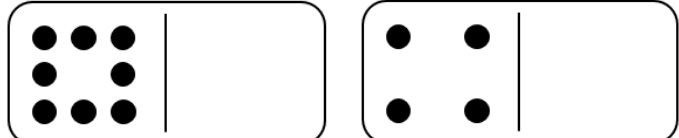
Draw enough dots to make 10.

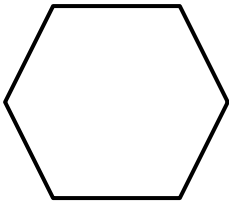
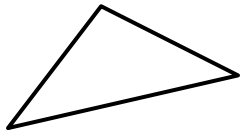
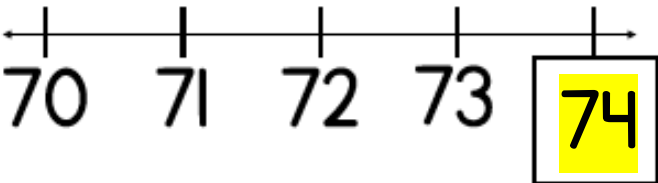






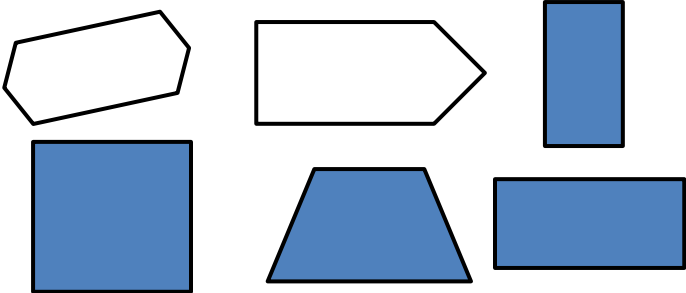
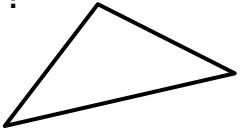
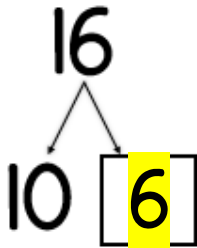



Subtract the numbers.

$$3 - 2 = \underline{\quad}$$

$$2 - 1 = \underline{\quad}$$

Wednesday	Thursday
<p>Color all the shapes with 4 corners.</p> 	<p>Is the shape flat or solid?</p>  <p>_____</p> <p>_____</p> <p>_____</p>
<p>What two numbers make 16?</p> 	<p>Fill in the missing number?</p> $10 + \underline{\quad\quad} = 14$
<p>Which group has less?</p> 	<p>Circle the correct words.</p> <div style="display: flex; align-items: center; justify-content: space-around;"> <div style="text-align: center;"> <p>3</p> </div> <div> <p>is greater than</p> <p>is less than</p> <p>is equal to</p> </div> <div style="text-align: center;"> <p>9</p> </div> </div>
<p>James has 4 pennies. He finds 5 more. How many pennies does James have now?</p>	<p>There are 7 chairs. 3 chairs are taken away. How many chairs are left?</p>
<p>Draw enough dots to make 9 on each domino.</p> 	<p>Draw enough dots to make 10.</p> 
<p>Add the numbers.</p> $3 + 1 = \underline{\quad\quad}$ $0 + 2 = \underline{\quad\quad}$	<p>Subtract the numbers.</p> $3 - 0 = \underline{\quad\quad}$ $4 - 2 = \underline{\quad\quad}$

Monday	Tuesday
<p>Draw a shape with 6 sides and 6 corners.</p> 	<p>Name the shape.</p>  <p>Triangle</p>
<p>Fill in the missing numbers.</p> 	<p>How many?</p> 
<p>Which group has more?</p> 	<p>Circle the correct words.</p> <p>7 is greater than 7</p> <p>7 is less than 7</p> <p>7 is equal to 7</p>
<p>There are 2 birds, and 5 fish. How many animals are there altogether?</p> <p>7</p>	<p>There are 8 pieces of pizza. 5 of them are eaten. How many are left?</p> <p>3</p>
<p>Draw enough dots to make 5 on each domino.</p> 	<p>Draw enough dots to make 10.</p> 
<p>Add the numbers.</p> $2 + 2 = 4$ $1 + 1 = 2$	<p>Subtract the numbers.</p> $3 - 2 = 1$ $2 - 1 = 1$

Wednesday	Thursday
<p>Color all the shapes with 4 corners.</p> 	<p>Is the shape flat or solid?</p>  <p>Flat</p>
<p>What two numbers make 16?</p> 	<p>Fill in the missing number?</p> $10 + \underline{4} = 14$
<p>Which group has less?</p> 	<p>Circle the correct words.</p> <p>3 is greater than 9</p> <p>3 is less than 9</p> <p>3 is equal to 9</p>
<p>James has 4 pennies. He finds 5 more. How many pennies does James have now?</p> <p>9</p>	<p>There are 7 chairs. 3 chairs are taken away. How many chairs are left?</p> <p>4</p>
<p>Draw enough dots to make 9 on each domino.</p> 	<p>Draw enough dots to make 10.</p> 
<p>Add the numbers.</p> $3 + 1 = 4$ $0 + 2 = 2$	<p>Subtract the numbers.</p> $3 - 0 = 3$ $4 - 2 = 2$