

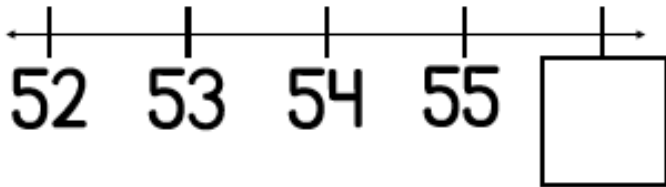
Name:

My Math Homework - Q3:8

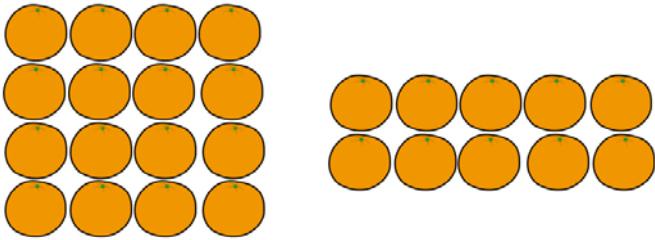
Week of:

**Monday**

Fill in the missing numbers.



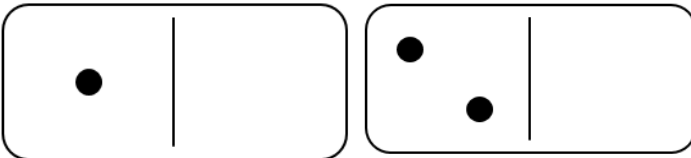
Which group has more?



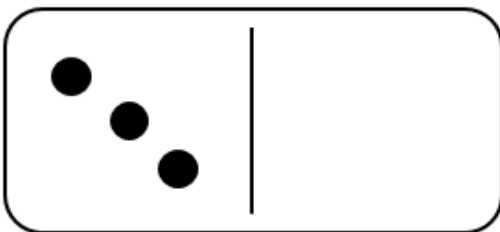
Brian has 6 pencils. He breaks 3.  
How many pencils are left?



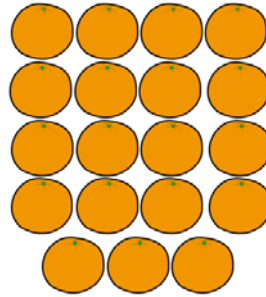
Draw enough dots to make 4 on  
each domino.



Draw enough dots to make 10.

**Tuesday**

How many?



Circle the correct words.

5

is greater than

is less than

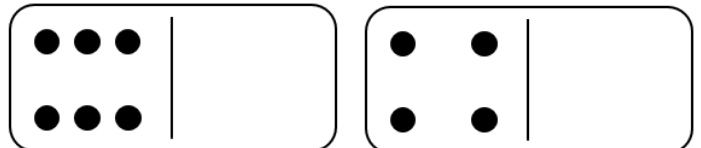
is equal to

6

There are 3 brown dogs, and 2 white  
dogs. How many brown and white  
dogs are there altogether?



Draw enough dots to make 7 on  
each domino.



Draw a line to match the numbers  
that add up to 10.

4

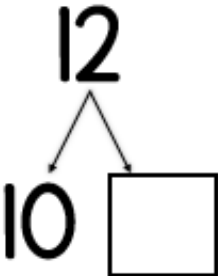
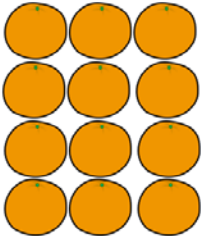
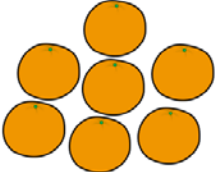





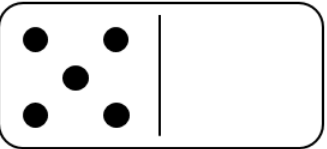
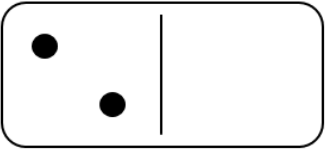
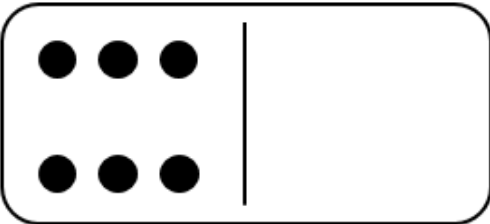
9

1

2

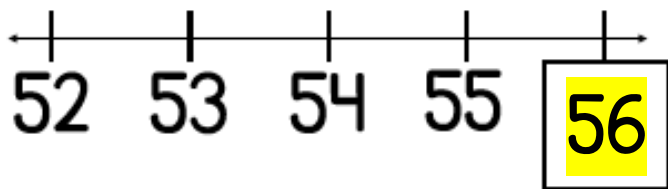
8

6

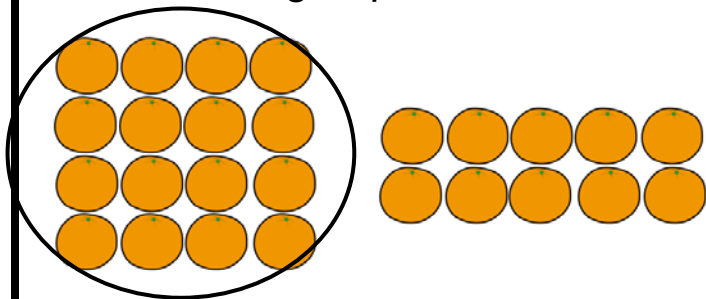
Wednesday	Thursday
<p>What two numbers make 12?</p> <div style="text-align: center;">  </div>	<p>Fill in the missing number?</p> $10 + \underline{\quad\quad} = 18$
<p>Which group has less?</p> <div style="display: flex; justify-content: space-around; align-items: center;">   </div>	<p>Circle the correct words.</p> <div style="display: flex; align-items: center; justify-content: space-around;"> <div style="text-align: center;"> <p>7</p> <p>is greater than</p> <p>is less than</p> <p>is equal to</p> </div> <div style="text-align: center;"> <p>3</p> </div> </div>
<p>There are 2 lemons. Amy picks 5 more. How many lemons are there in all?</p> <div style="display: flex; justify-content: space-around; align-items: center;">   </div>	<p>There are 5 cookies. 3 of them are eaten. How many cookies are left?</p> <div style="display: flex; justify-content: space-around; align-items: center;">  </div>
<p>Draw enough dots to make 6 on each domino.</p> <div style="display: flex; justify-content: space-around; align-items: center;">   </div>	<p>Draw enough dots to make 8 on each domino.</p> <div style="display: flex; justify-content: space-around; align-items: center;">   </div>
<p>Draw enough dots to make 10.</p> <div style="display: flex; justify-content: space-around; align-items: center;">  </div>	<p>Draw a line to match the numbers that add up to 10.</p> <div style="display: flex; justify-content: space-around; align-items: center;"> <div style="text-align: center;"> <p>3</p> <p>5</p> <p>0</p> </div> <div style="text-align: center;"> <p>10</p> <p>5</p> <p>7</p> </div> </div>

## Monday

Fill in the missing numbers.



Which group has more?

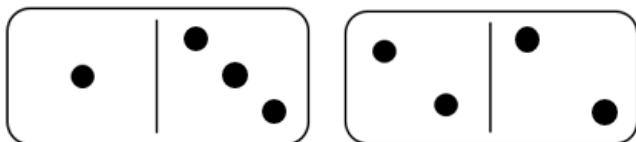


Brian has 6 pencils. He breaks 3. How many pencils are left?

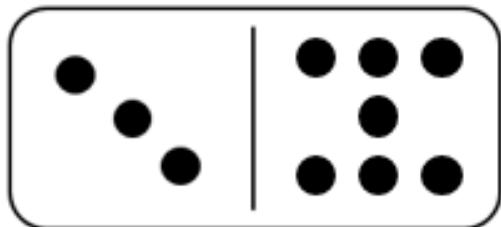
3



Draw enough dots to make 4 on each domino.

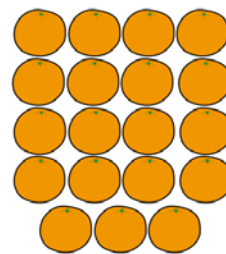


Draw enough dots to make 10.



## Tuesday

How many?



19

Circle the correct words.

5

is greater than

is less than

is equal to

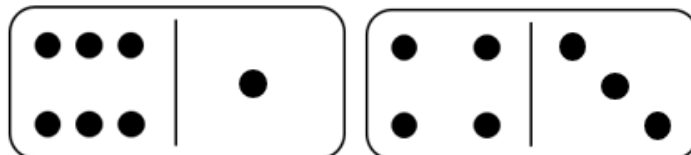
6

There are 3 brown dogs, and 2 white dogs. How many brown and white dogs are there altogether?

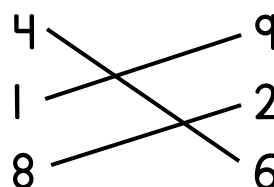
5



Draw enough dots to make 7 on each domino.

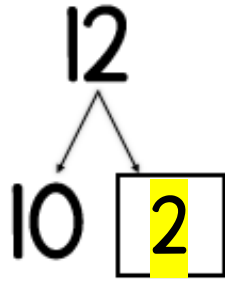


Draw a line to match the numbers that add up to 10.

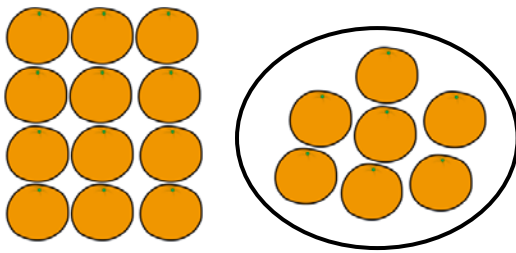


## Wednesday

What two numbers make 12?




Which group has less?



There are 2 lemons. Amy picks 5 more. How many lemons are there in all?

7



## Thursday

Fill in the missing number?

$$10 + \underline{8} = 18$$

Circle the correct words.

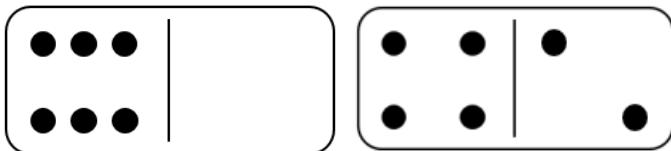
7 **is greater than** 3  
is less than  
is equal to

There are 5 cookies. 3 of them are eaten. How many cookies are left?

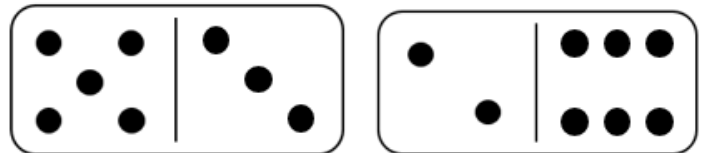
2



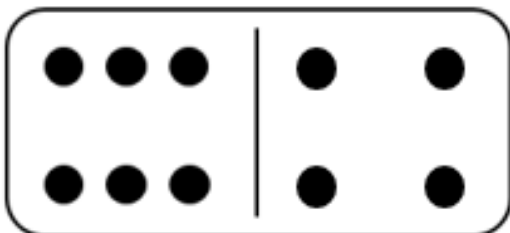
Draw enough dots to make 6 on each domino.



Draw enough dots to make 8 on each domino.



Draw enough dots to make 10.



Draw a line to match the numbers that add up to 10.

3 — 10  
5 — 5  
0 — 7