

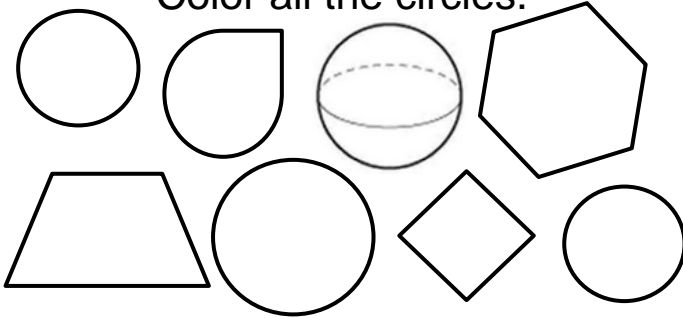
Name:

My Math Homework - Q3:7

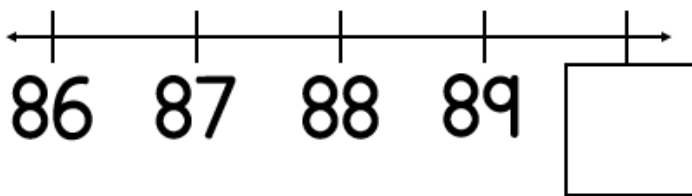
Week of:

Monday

Color all the circles.



Fill in the missing numbers.



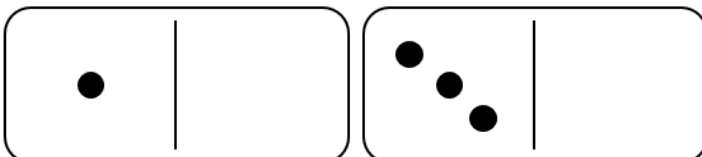
Which group has more?



There are 7 penguins. 2 more join them. How many penguins are there now?




Draw enough dots to make 5 on each domino.



Tuesday

Name the shape.



How many?



Circle the correct words.

3

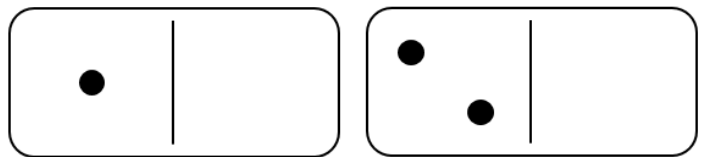
is greater than
is less than
is equal to

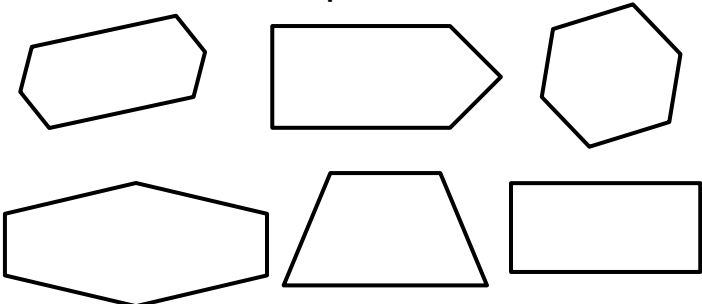

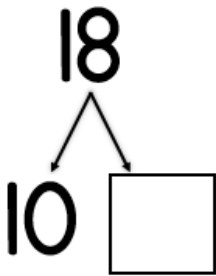




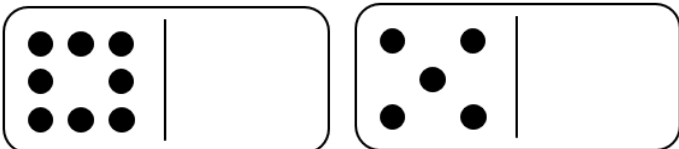
1

There are 4 flowers. The girl picks 3 or them. How many are left?



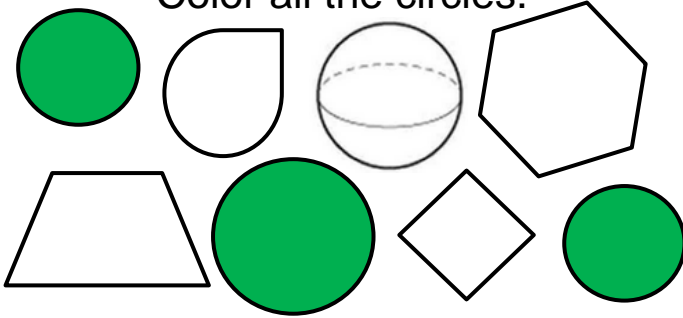
Draw enough dots to make 3 on each domino.



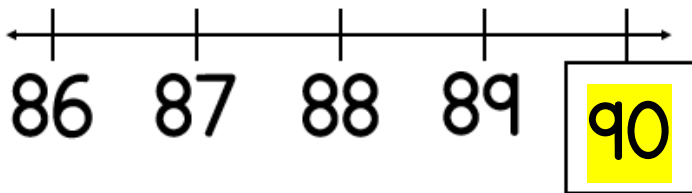
Wednesday	Thursday
<p>Color all the shapes with 6 corners.</p> 	<p>Is the shape flat or solid?</p>  <hr/> <hr/> <hr/>
<p>What two numbers make 18?</p> 	<p>Fill in the missing number?</p> $10 + \underline{\quad\quad} = 13$
<p>Which group has less?</p> 	<p>Circle the correct words.</p> <div style="display: flex; align-items: center; justify-content: space-around;"> <div style="text-align: center;"> <p>4</p> </div> <div> <p>is greater than</p> <p>is less than</p> <p>is equal to</p> </div> <div style="text-align: center;"> <p>4</p> </div> </div>
<p>Amy has 3 baseballs. She gets 2 more. How many does she have altogether?</p> 	<p>There are 6 oranges. 2 are eaten. How many oranges are left?</p> 
<p>Draw enough dots to make 8 on each domino.</p> 	<p>Draw enough dots to make 10 on each domino.</p> 

Monday


Color all the circles.



Fill in the missing numbers.



Which group has more?




There are 7 penguins. 2 more join them. How many penguins are there now?

9




Draw enough dots to make 5 on each domino.



Tuesday

Name the shape.



Square

How many?



15

Circle the correct words.

3

is greater than

is less than

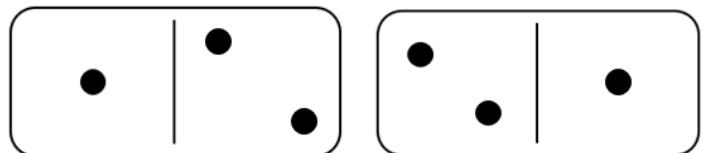
is equal to

1

There are 4 flowers. The girl picks 3 or them. How many are left?

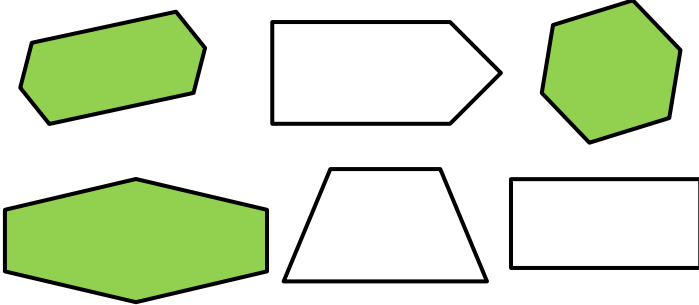


Draw enough dots to make 3 on each domino.

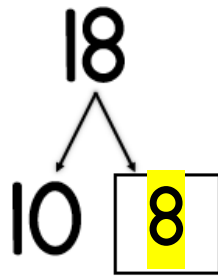


Wednesday


Color all the shapes with 6 corners.



What two numbers make 18?



Which group has less?




Amy has 3 baseballs. She gets 2 more. How many does she have altogether?

5




Draw enough dots to make 8 on each domino.



Thursday

Is the shape flat or solid?



Flat

Fill in the missing number?

$$10 + \underline{3} = 13$$

Circle the correct words.

4 is greater than 4
is less than
is equal to

There are 6 oranges. 2 are eaten. How many oranges are left?

4



Draw enough dots to make 10 on each domino.

