

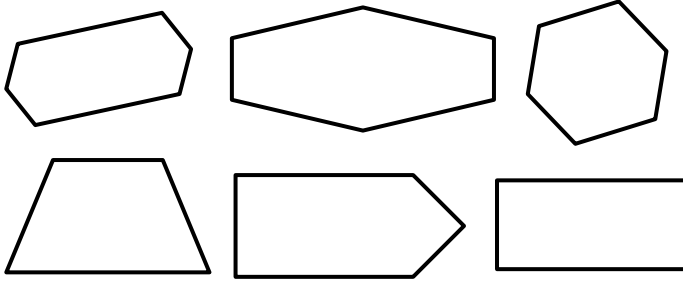
Name: _____

My Math Homework - Q3:6

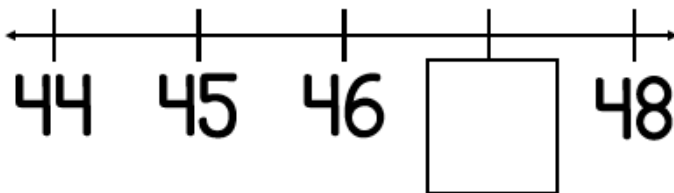
Week of: _____

Monday

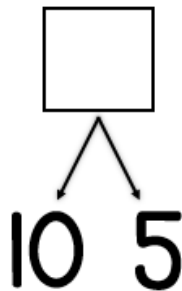
Color all the hexagons.



Fill in the missing numbers.



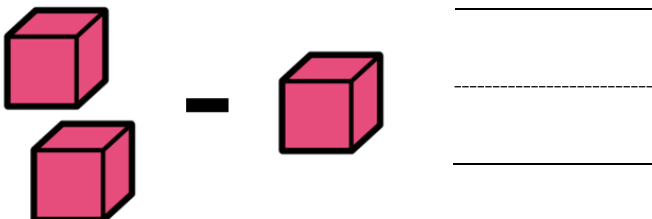
Fill in the missing number.



Which group has more?

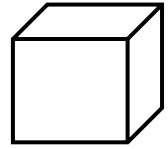


How many blocks are left?



Tuesday

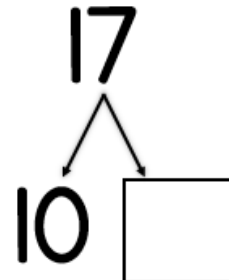
Name the shape.



How many?



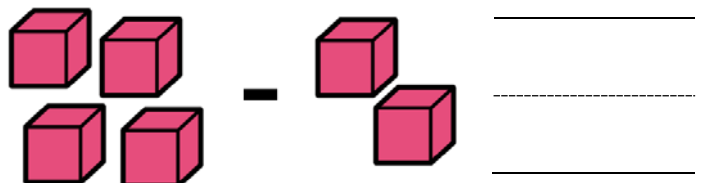
What two numbers make 17?



Which number is greater?


9 8

How many blocks are left?

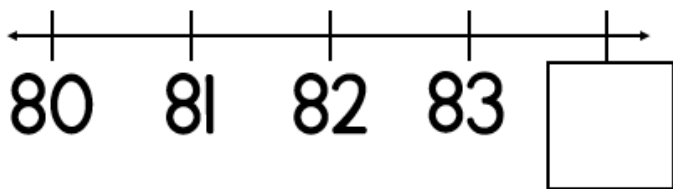


Wednesday

Color all the shapes with 4 sides.

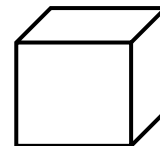


Fill in the missing number.



Thursday

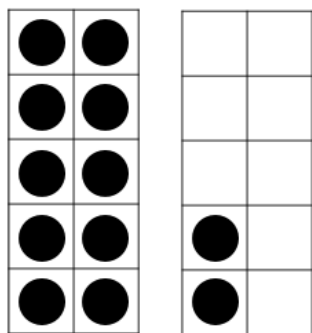
Is the shape flat or solid?



How many?



How many?



Fill in the missing number?

$$10 + \underline{\quad} = 11$$


Which group has less?



Circle the correct words.

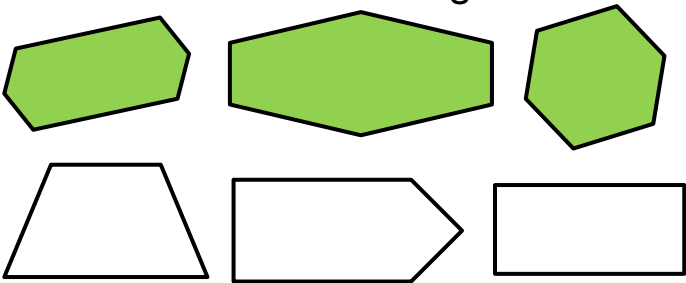
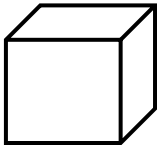
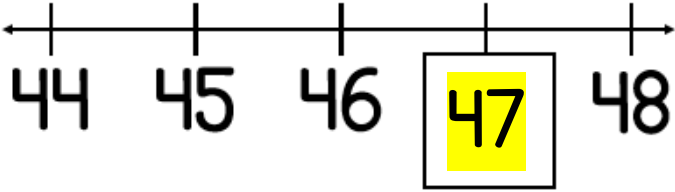

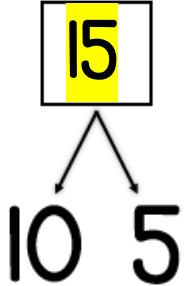
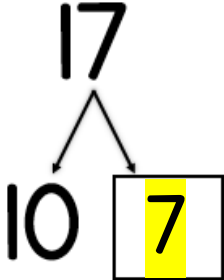


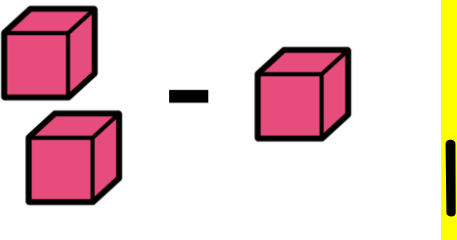
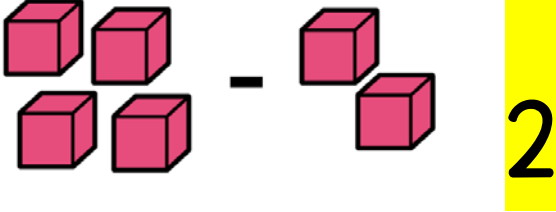
5 is greater than 8
is less than
is equal to

There are 6 frogs. 2 frogs jump away. How many frogs are left?



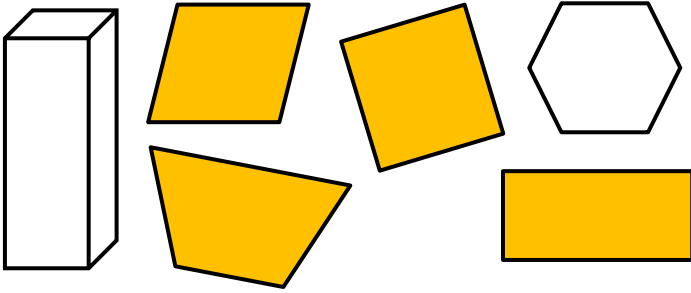
There are 4 balloons. 1 balloon floats away. How many balloons are left?



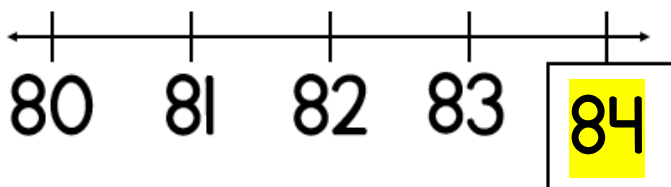
Monday	Tuesday
<p>Color all the hexagons.</p> 	<p>Name the shape.</p>  <p>Cube</p>
<p>Fill in the missing numbers.</p> 	<p>How many?</p> 
<p>Fill in the missing number.</p> 	<p>What two numbers make 17?</p> 
<p>Which group has more?</p> 	<p>Which number is greater?</p> 
<p>How many blocks are left?</p> 	<p>How many blocks are left?</p> 

Wednesday

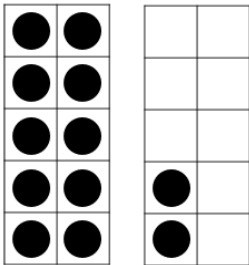
Color all the shapes with 4 sides.



Fill in the missing number.




How many?




12

Which group has less?



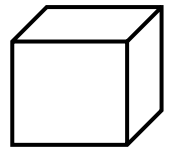
There are 6 frogs. 2 frogs jump away. How many frogs are left?

4



Thursday

Is the shape flat or solid?



Solid

How many?



7

Fill in the missing number?

$$10 + \underline{2} = 12$$

Circle the correct words.

5 is greater than 8
is less than
is equal to

There are 4 balloons. 1 balloon floats away. How many balloons are left?

3

