


Name: _____

My Math Homework - Q3:5

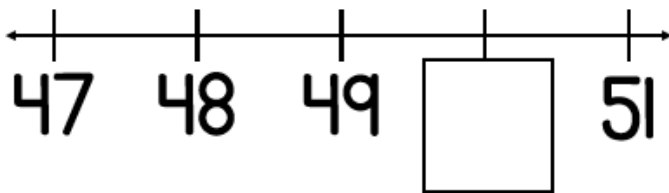
Week of: _____

Monday

Color all of the rectangles.

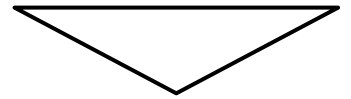


Fill in the missing numbers.



Tuesday

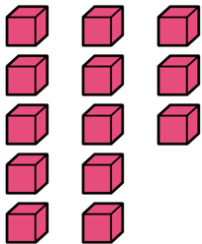
Name the shape.



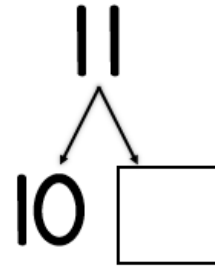
How many?



Circle a group of ten. How many are leftover?



What two numbers make 11?



Which group has more?

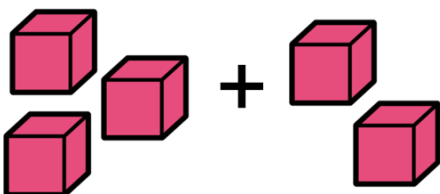


Which number is greater?

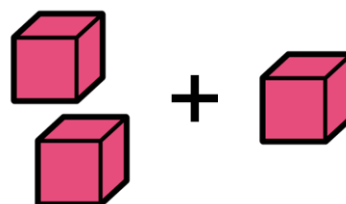
5

2

How many blocks are there in all?

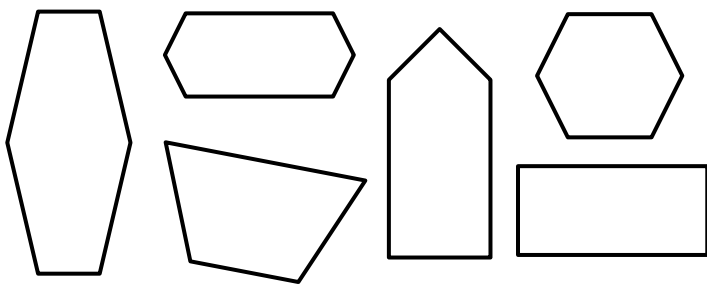


How many blocks are there in all?

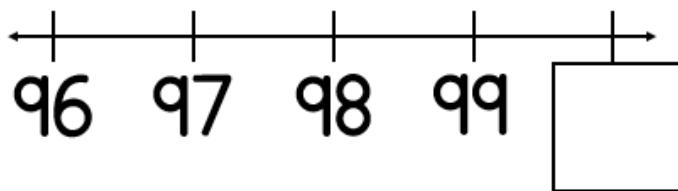


Wednesday


Color all the shapes with 6 sides.




Fill in the missing number.



How many?



Which group has less?

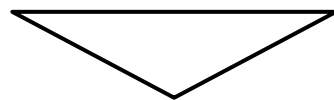


There are 4 frogs. 1 frog joins them.
How many frogs are there now?




Thursday

Is the shape flat or solid?



How many?



Fill in the missing number?

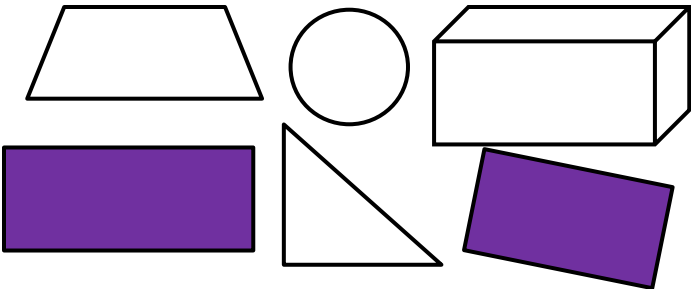

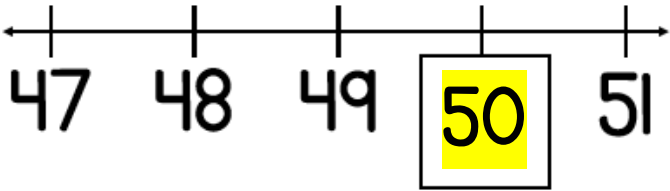

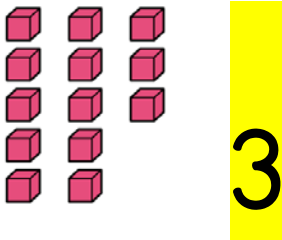
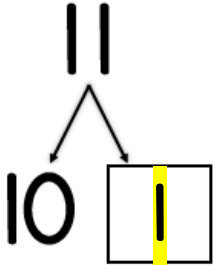

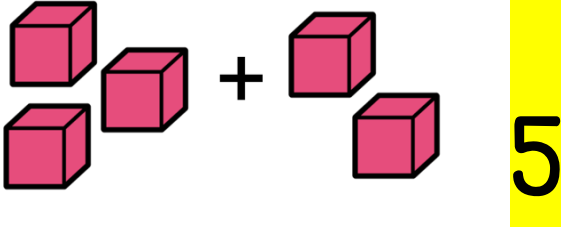
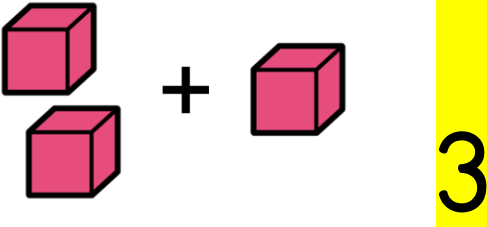
$$10 + \underline{\quad} = 19$$

Which number is less?

3 8

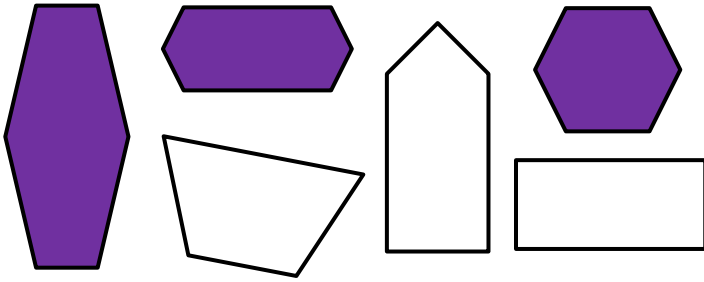
There are 5 balloons. 2 more balloons are made.
How many balloons are there now?



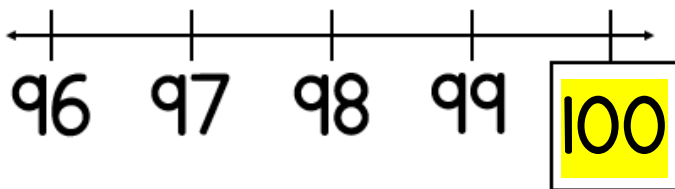
Monday	Tuesday
<p>Color all of the rectangles.</p> 	<p>Name the shape.</p>  <p>Triangle</p>
<p>Fill in the missing numbers.</p> 	<p>How many?</p>  <p>6</p>
<p>Circle a group of ten. How many are leftover?</p> 	<p>What two numbers make 11?</p> 
<p>Which group has more?</p> 	<p>Which number is greater?</p> <p>5 2</p>
<p>How many blocks are there in all?</p> 	<p>How many blocks are there in all?</p> 

Wednesday


Color all the shapes with 6 sides.




Fill in the missing number.



How many?



Which group has less?



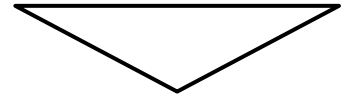
There are 4 frogs. 1 frog joins them.
How many frogs are there now?

5




Thursday

Is the shape flat or solid?



Flat


How many?



Fill in the missing number?

$$10 + 9 = 19$$

Which number is less?



There are 5 balloons. 2 more balloons are made.
How many balloons are there in all?

7

