

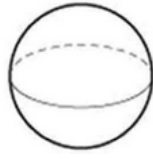
Name: \_\_\_\_\_

My Math Homework - Q3:2

Week of: \_\_\_\_\_

## Monday

Name the shape.




---

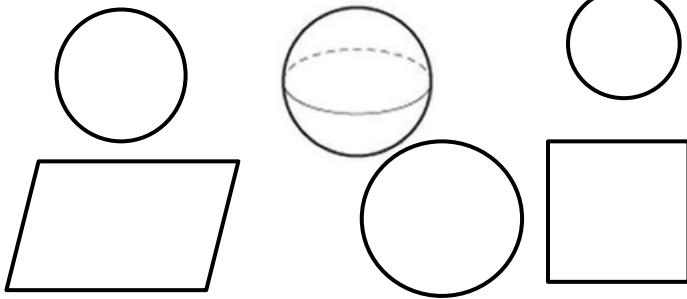


---

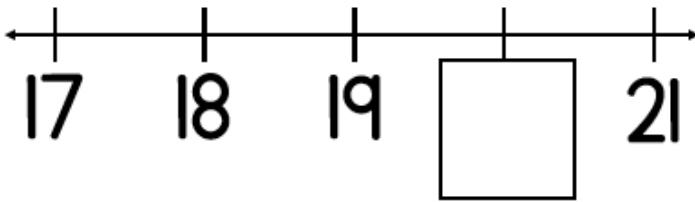


---

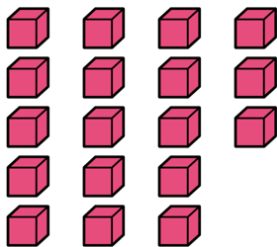
Color all of the circles.



Fill in the missing numbers.



Circle a group of ten. How many are leftover?




---




---



---

How many?




---



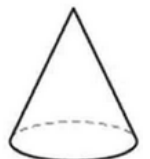
---



---

## Tuesday

Is the shape flat or solid?




---



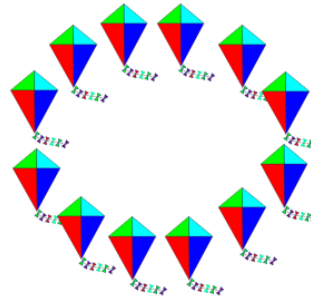
---



---

Draw a shape with 6 corners.

How many?




---

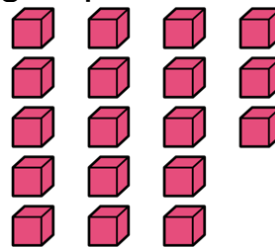


---



---

How many blocks are there? Circle a group of ten to help you count.




---

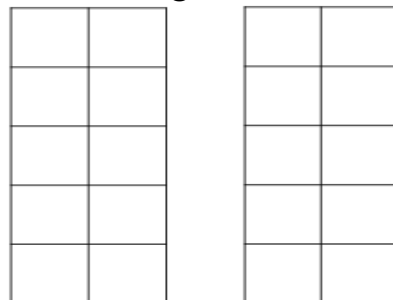


---




---

Draw 15 using the ten frames.



## Wednesday

Name the shape.




---



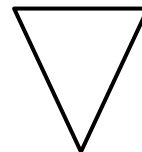
---



---

## Thursday

Is the shape flat or solid?




---

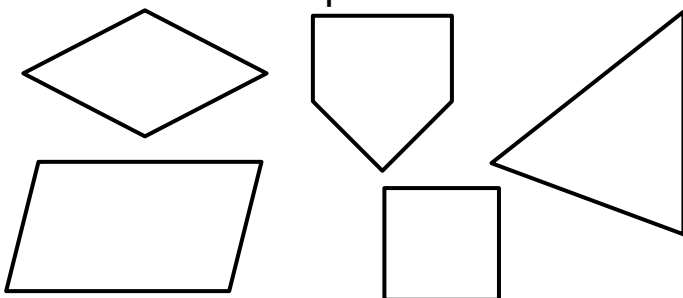


---



---

Color all the shapes with 4 corners.



Draw a shape with 3 sides.

---

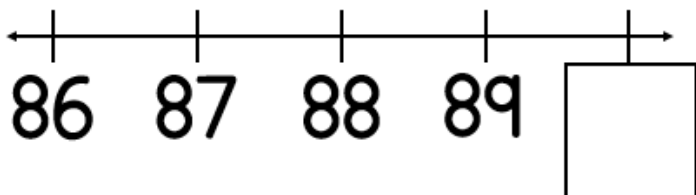


---



---

Fill in the missing number.



How many?




---

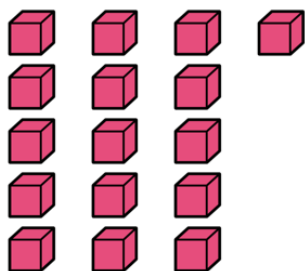


---



---

Circle a group of ten. How many are leftover?




---

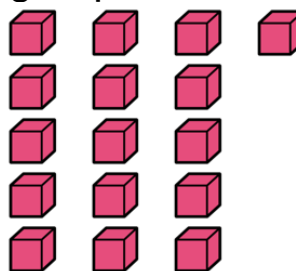


---



---

How many blocks are there? Circle a group of ten to help you count.




---




---



---

How many?




---

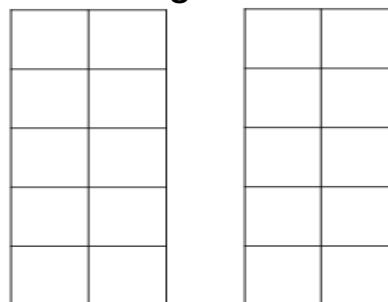


---



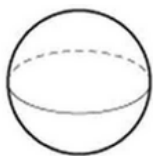
---

Draw 11 using the ten frames.



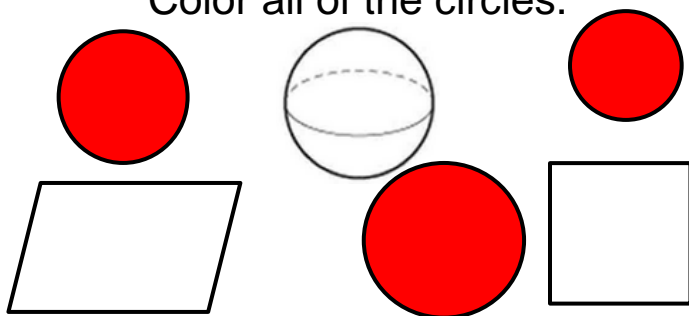
## Monday

Name the shape.

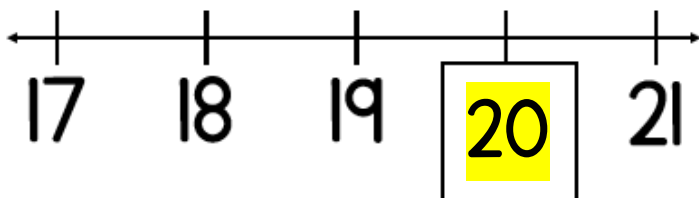


**Sphere**

Color all of the circles.



Fill in the missing numbers.



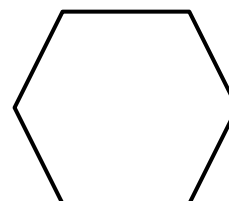
## Tuesday

Is the shape flat or solid?

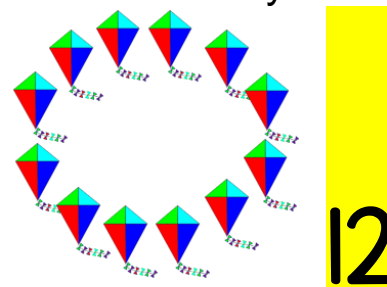


**Solid**


Draw a shape with 6 corners.



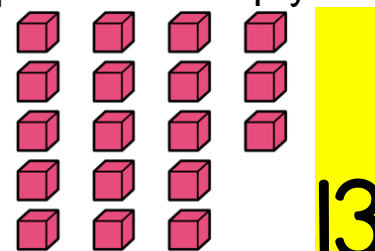
How many?




Circle a group of ten. How many are leftover?



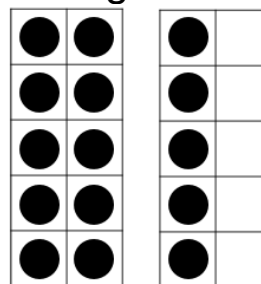
How many blocks are there? Circle a group of ten to help you count.



How many?




Draw 15 using the ten frames.



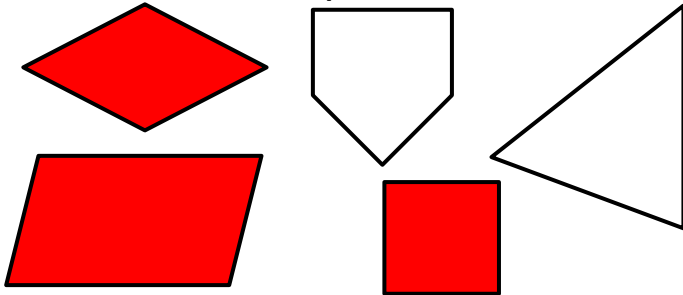
## Wednesday

Name the shape.

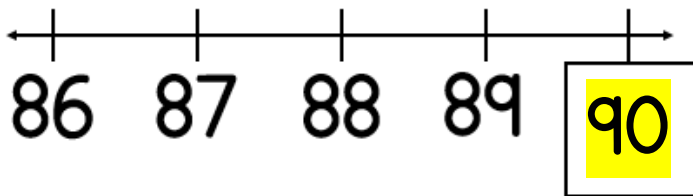


**Square**

Color all the shapes with 4 corners.




Fill in the missing number.



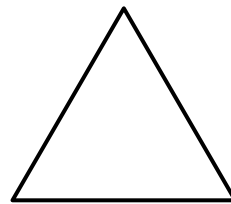
## Thursday

Is the shape flat or solid?



**Flat**

Draw a shape with 3 sides.

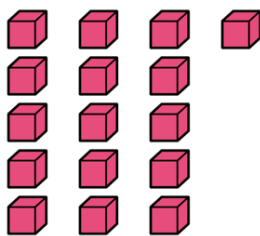


How many?



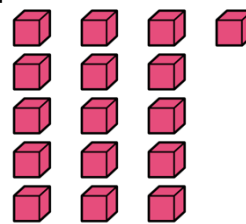
**19**

Circle a group of ten. How many are leftover?




**6**

How many blocks are there? Circle a group of ten to help you count.



**16**

How many?



**19**

Draw 11 using the ten frames.

