

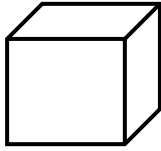
Name: \_\_\_\_\_

My Math Homework - Q3:1

Week of: \_\_\_\_\_

## Monday

Name the shape.




---

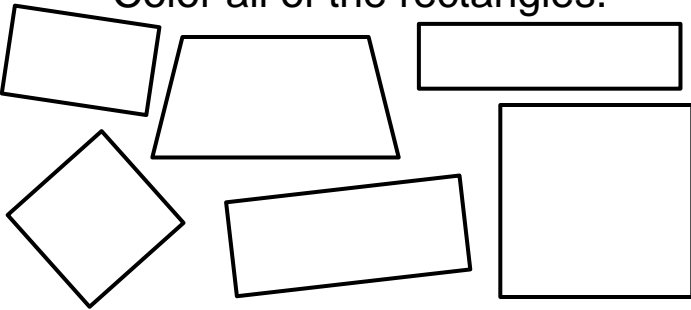


---

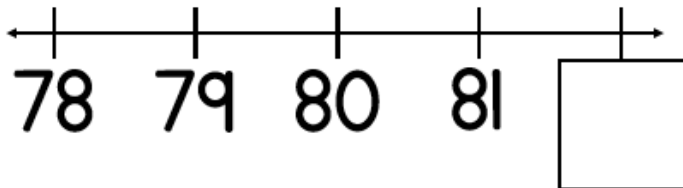


---

Color all of the rectangles.



Fill in the missing numbers.



How many?




---

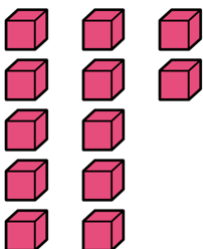


---



---

Circle a group of ten. How many are leftover?




---



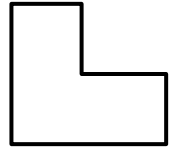
---



---

## Tuesday

Is the shape flat or solid?




---

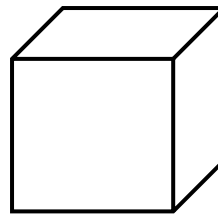


---



---

How many faces does the shape have?




---

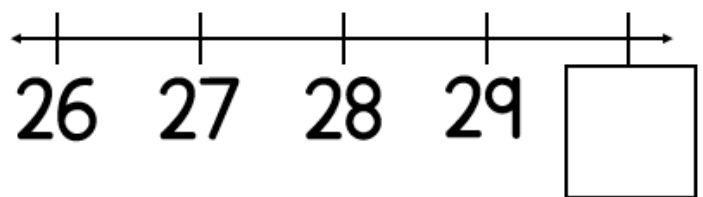


---

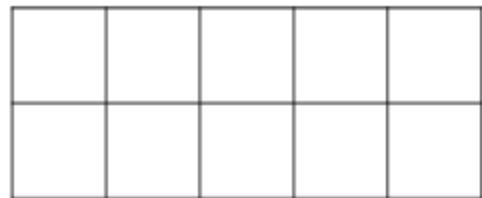


---

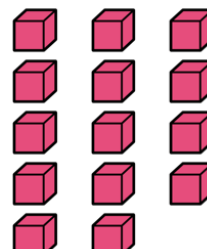
Fill in the missing numbers.



Fill in the ten frames to show 3.



Circle a group of ten. How many are leftover?





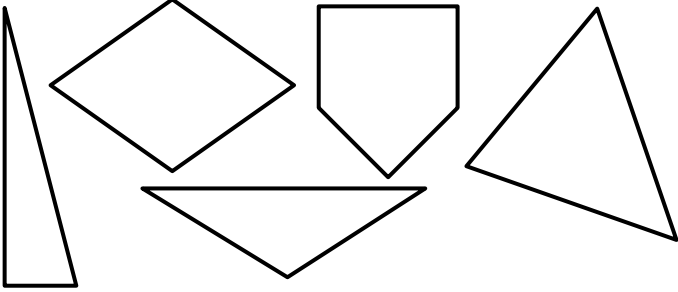
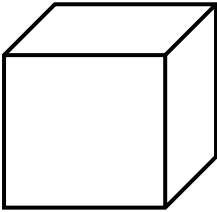
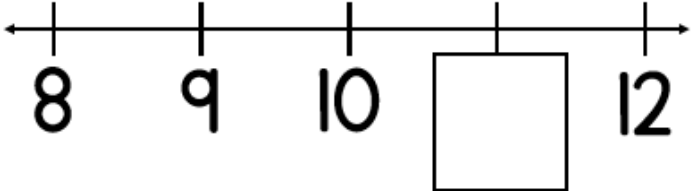
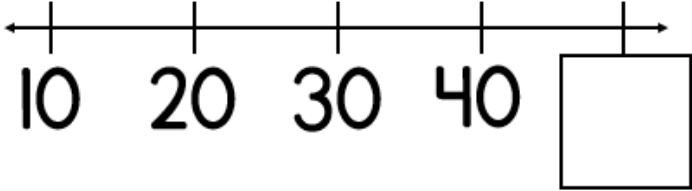

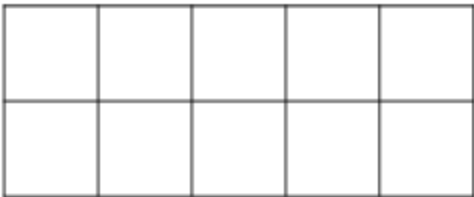
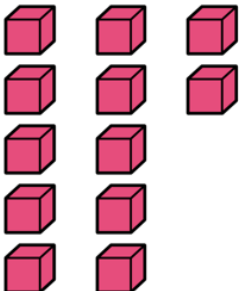
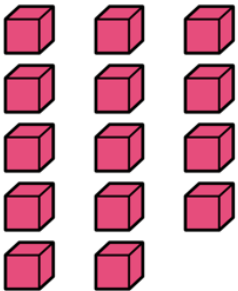

---

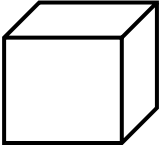
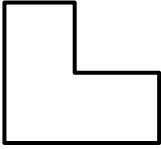
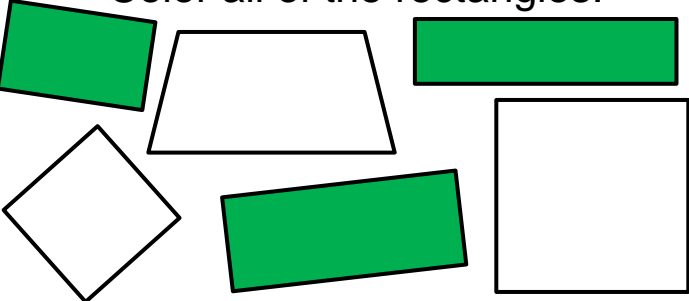
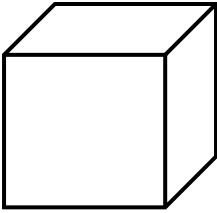
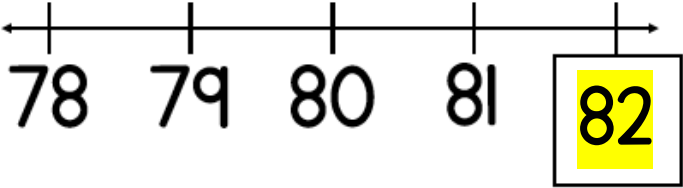
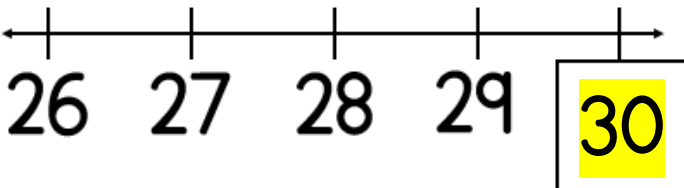

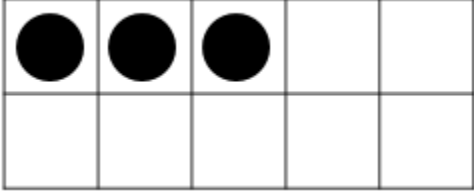
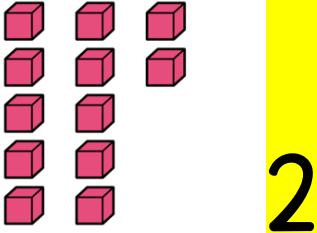



---



---

Wednesday	Thursday
<p>Name the shape.</p>  <p>_____</p> <p>_____</p>	<p>Is the shape flat or solid?</p>  <p>_____</p> <p>_____</p>
<p>Color all the shapes with 3 sides.</p> 	<p>How many corners does the shape have?</p>  <p>_____</p> <p>_____</p> <p>_____</p>
<p>Fill in the missing number.</p> 	<p>Fill in the missing number.</p> 
<p>How many?</p>  <p>_____</p> <p>_____</p> <p>_____</p>	<p>Fill in the ten frames to show 9.</p> 
<p>How many blocks are there? Circle a group of ten to help you count.</p>  <p>_____</p> <p>_____</p> <p>_____</p>	<p>How many blocks are there? Circle a group of ten to help you count.</p>  <p>_____</p> <p>_____</p> <p>_____</p>

Monday	Tuesday
<p>Name the shape.</p>  <p><b>Cube</b></p>	<p>Is the shape flat or solid?</p>  <p><b>Flat</b></p>
<p>Color all of the rectangles.</p> 	<p>How many faces does the shape have?</p>  <p><b>6</b></p>
<p>Fill in the missing numbers.</p> 	<p>Fill in the missing numbers.</p> 
<p>How many?</p>  <p><b>6</b></p>	<p>Fill in the ten frames to show 3.</p> 
<p>Circle a group of ten. How many are leftover?</p>  <p><b>2</b></p>	<p>Circle a group of ten. How many are leftover?</p>  <p><b>4</b></p>

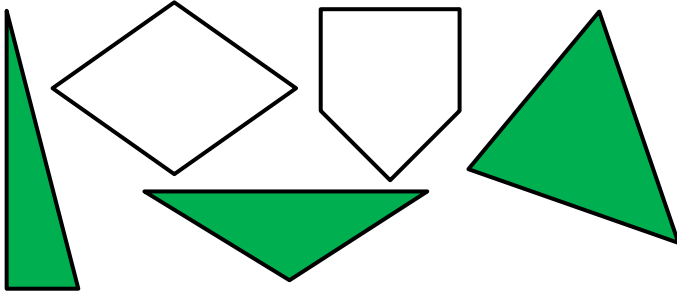
## Wednesday

Name the shape.

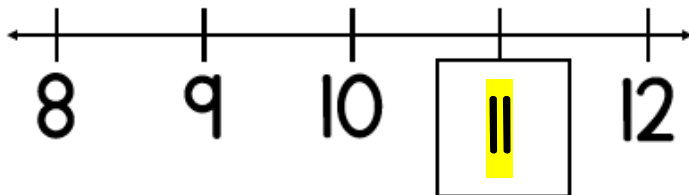


**Rectangle**

Color all the shapes with 3 sides.



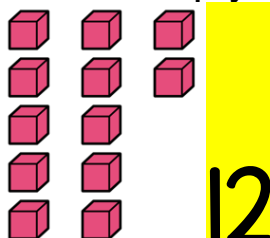
Fill in the missing number.



How many?

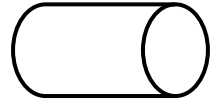


How many blocks are there? Circle a group of ten to help you count.



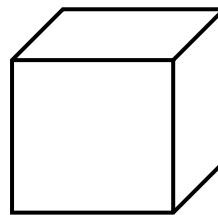
## Thursday

Is the shape flat or solid?



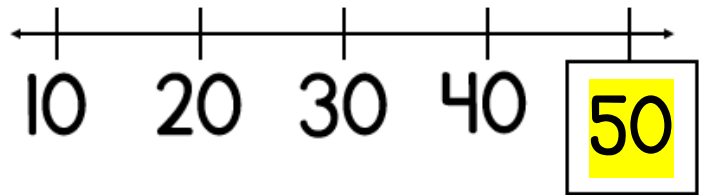
**Flat**

How many corners does the shape have?

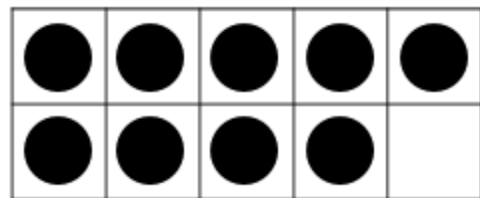


**8**

Fill in the missing number.



Fill in the ten frames to show 9.



How many blocks are there? Circle a group of ten to help you count.

