

Name: _____

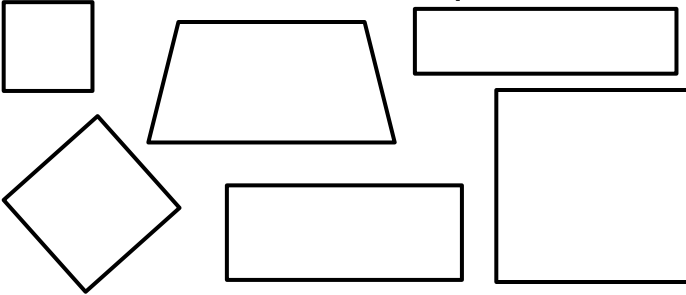
My Math Homework - Q2:9

Week of: _____

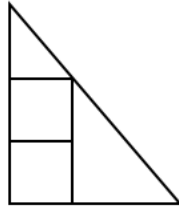
Monday

Draw a hexagon inside a circle.

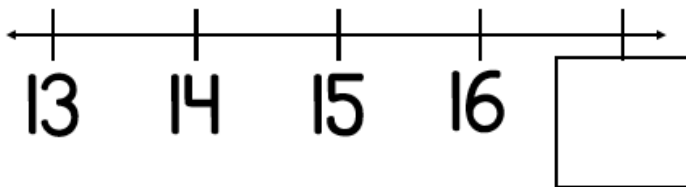
Color all of the squares.



Edward used some shapes to build this shape. How many shapes did he use?



Fill in the missing number.

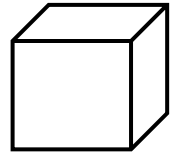


How many?



Tuesday

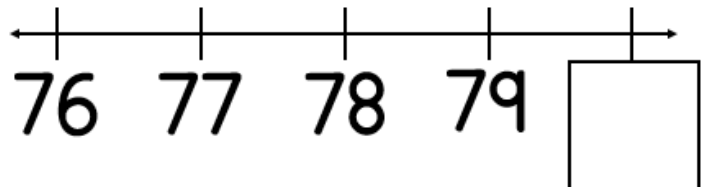
Is the shape flat or solid?




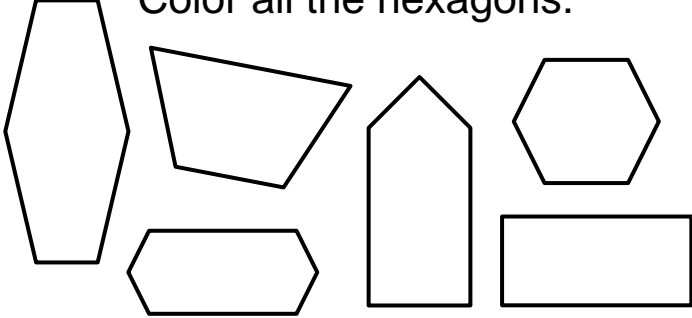
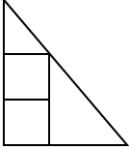
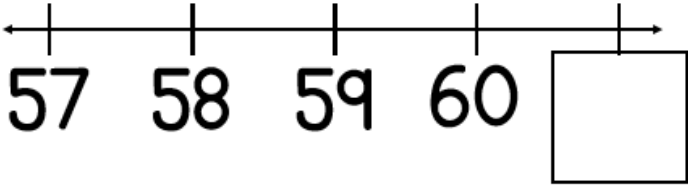
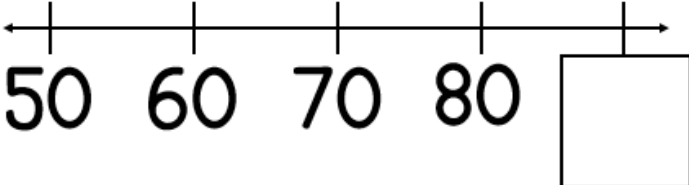

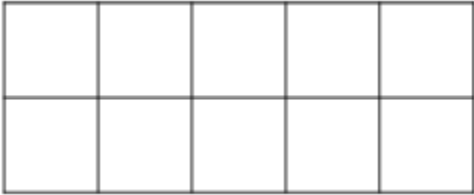
Draw a shape with 3 sides and 3 corners

Skip around the room, and count how many skips you can do.

Fill in the missing number.

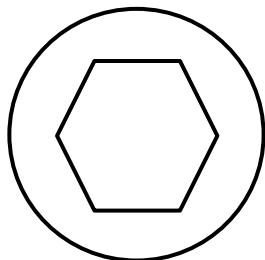


Fill in the ten frames to show 8.

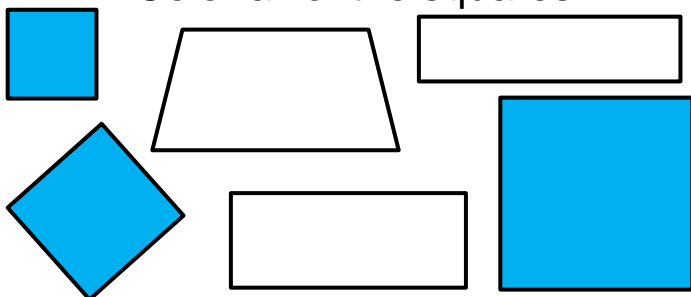
Wednesday	Thursday
<p>Draw a circle outside a square.</p>	<p>Is the shape flat or solid? </p> <p>_____</p> <p>_____</p> <p>_____</p>
<p>Color all the hexagons.</p> 	<p>Draw a shape with 4 equal sides.</p>
<p> Edward made a shape with some blocks. What shape did he make?</p> <p>_____</p> <p>_____</p> <p>_____</p>	<p>Count how long you can stare without blinking your eyes. Write the number you counted to.</p> <p>_____</p> <p>_____</p> <p>_____</p>
<p>Fill in the missing number.</p> 	<p>Fill in the missing number.</p> 
<p>How many?</p>  <p>_____</p> <p>_____</p>	<p>Fill in the ten frames to show 6.</p> 

Monday

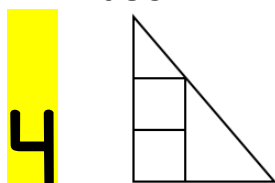
Draw a hexagon inside a circle.



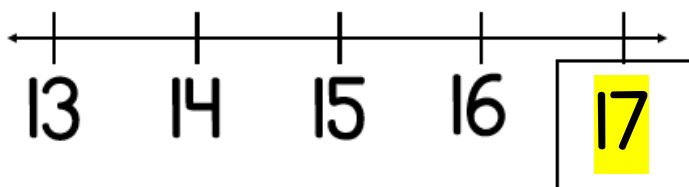
Color all of the squares.



Edward used some shapes to build this shape. How many shapes did he use?



Fill in the missing number.

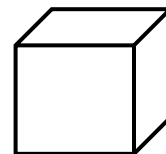


How many?



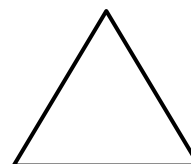
Tuesday

Is the shape flat or solid?



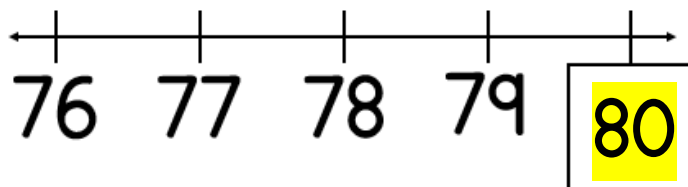
Solid

Draw a shape with 3 sides and 3 corners

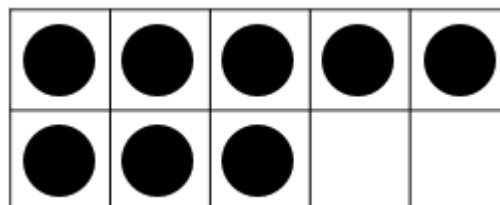


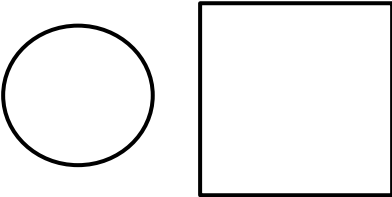

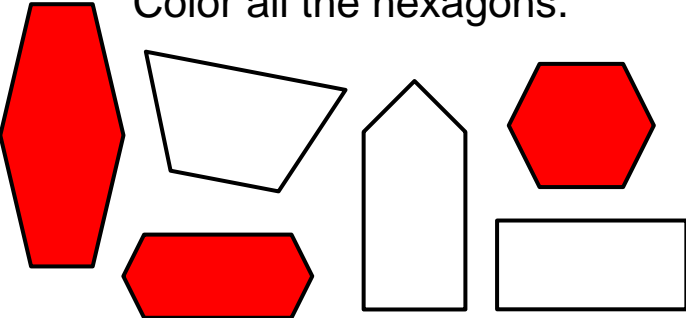

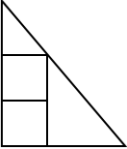
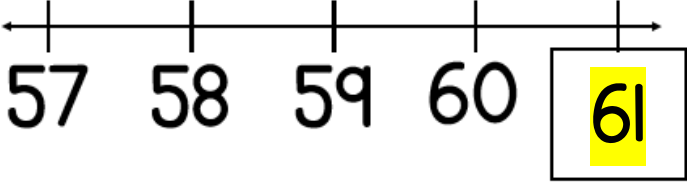
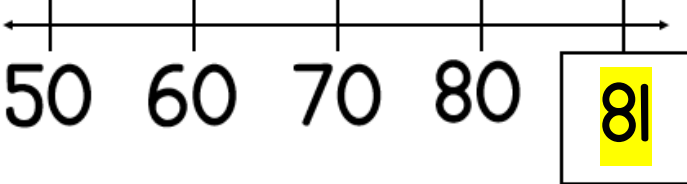

Skip around the room, and count how many skips you can do.

Fill in the missing number.



Fill in the ten frames to show 8.



Wednesday	Thursday
<p>Draw a circle outside a square.</p> 	<p>Is the shape flat or solid?</p>  <p>Flat</p>
<p>Color all the hexagons.</p> 	<p>Draw a shape with 4 equal sides.</p> 
 <p>Edward made a shape with some blocks. What shape did he make?</p> <p>Triangle</p>	<p>Count how long you can stare without blinking your eyes. Write the number you counted to.</p> <p>_____</p> <p>_____</p>
<p>Fill in the missing number.</p> 	<p>Fill in the missing number.</p> 
<p>How many?</p>  <p>14</p>	<p>Fill in the ten frames to show 6.</p> 