

Name: \_\_\_\_\_

My Math Homework - Q2:8

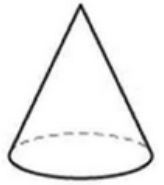
Week of: \_\_\_\_\_

## Monday

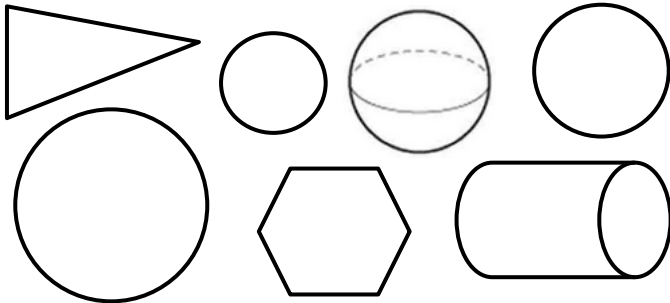
Draw a square to the right of a circle.

## Tuesday

Is the shape flat or solid?



Color all of the circles.



Draw a shape with no straight sides.

Grace used some triangles to make this shape. How many triangles did she use?

\_\_\_\_\_

\_\_\_\_\_

\_\_\_\_\_



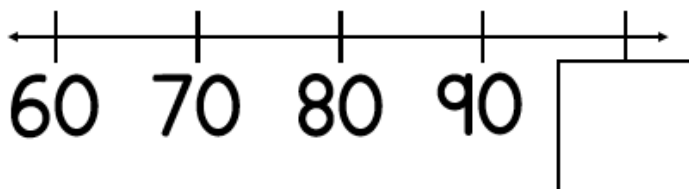
Go outside for 5 minutes and count how many cars drive by.

\_\_\_\_\_

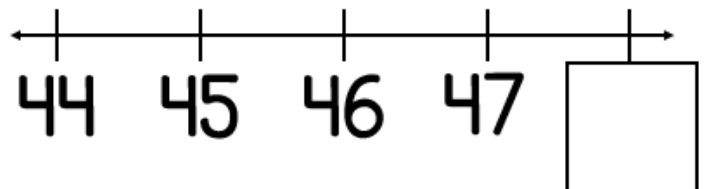
\_\_\_\_\_

\_\_\_\_\_


Fill in the missing number.



Fill in the missing number.



How many?




\_\_\_\_\_

\_\_\_\_\_

\_\_\_\_\_

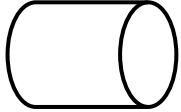
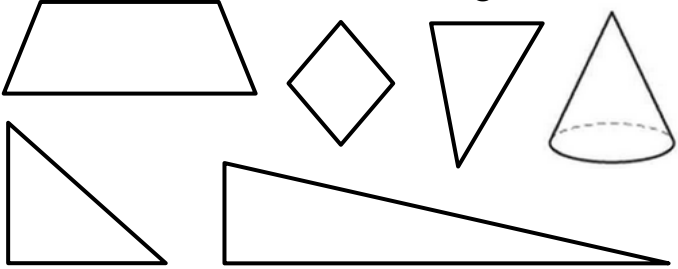

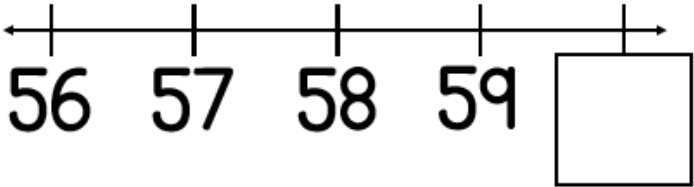
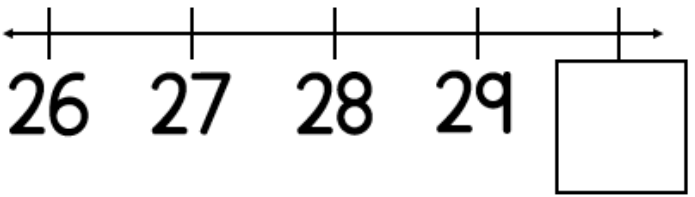


How many?



\_\_\_\_\_

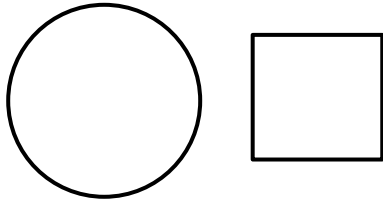
\_\_\_\_\_

\_\_\_\_\_

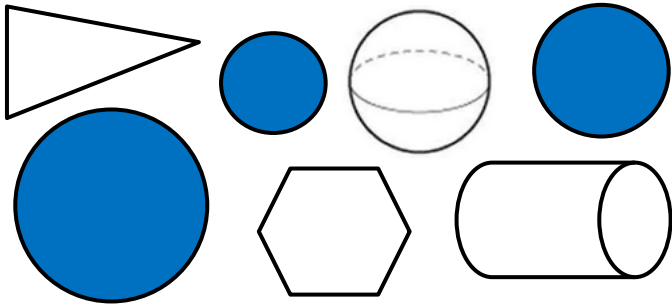
Wednesday	Thursday
<p>Draw a triangle to the left of a rectangle.</p>	<p>Is the shape flat or solid? </p> <p>_____</p> <p>_____</p> <p>_____</p>
<p>Color all of the triangles.</p> 	<p>Draw any closed shape.</p>
<p> Grace made a shape with some blocks. What shape did she make?</p> <p>_____</p> <p>_____</p> <p>_____</p>	<p>Count how many times you can jump in one minute. Have an adult time you.</p> <p>_____</p> <p>_____</p> <p>_____</p>
<p>Fill in the missing number.</p> 	<p>Fill in the missing number.</p> 
<p>How many?</p>  <p>_____</p> <p>_____</p> <p>_____</p>	<p>How many?</p>  <p>_____</p> <p>_____</p> <p>_____</p>

## Monday

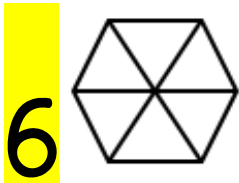
Draw a square to the right of a circle.



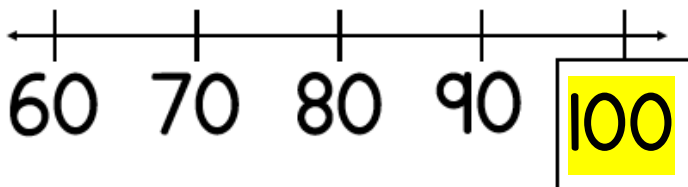
Color all of the circles.




Grace used some triangles to make this shape. How many triangles did she use?



Fill in the missing number.

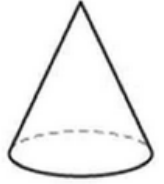


How many?




## Tuesday

Is the shape flat or solid?



**Solid**

Draw a shape with no straight sides.



Go outside for 5 minutes and count how many cars drive by.

---

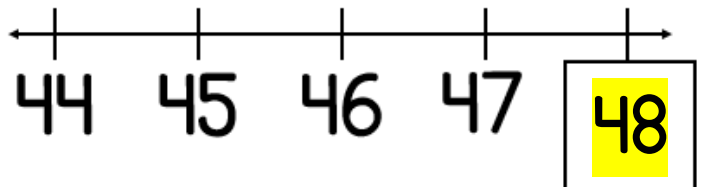


---




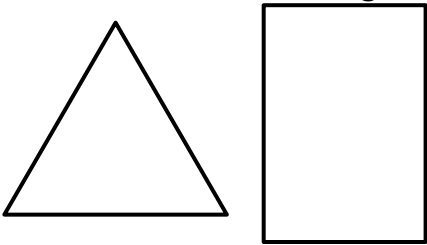
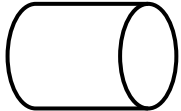
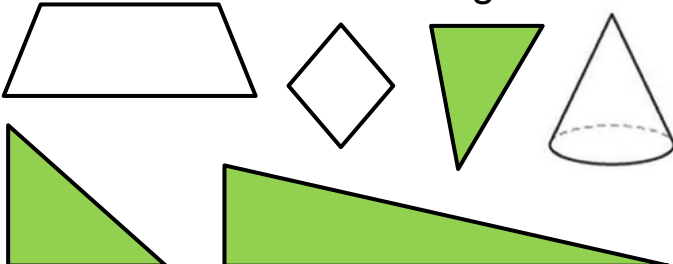


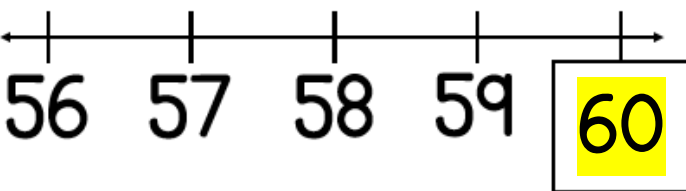
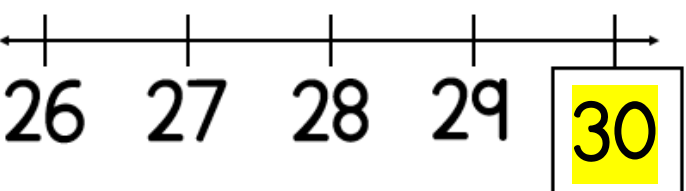


---

Fill in the missing number.



How many?



Wednesday	Thursday
<p>Draw a triangle to the left of a rectangle.</p> 	<p>Is the shape flat or solid?</p>  <p><b>Solid</b></p>
<p>Color all of the triangles.</p> 	<p>Draw any closed shape.</p> 
 <p>Grace made a shape with some blocks. What shape did she make?</p> <p><b>Hexagon</b></p>	<p>Count how many times you can jump in one minute. Have an adult time you.</p> <p>_____</p> <p>_____</p> <p>_____</p>
<p>Fill in the missing number.</p> 	<p>Fill in the missing number.</p> 
<p>How many?</p>  <p><b>20</b></p>	<p>How many?</p>  <p><b>3</b></p>