

Name: _____

My Math Homework - Q2:7


Week of: _____

Monday

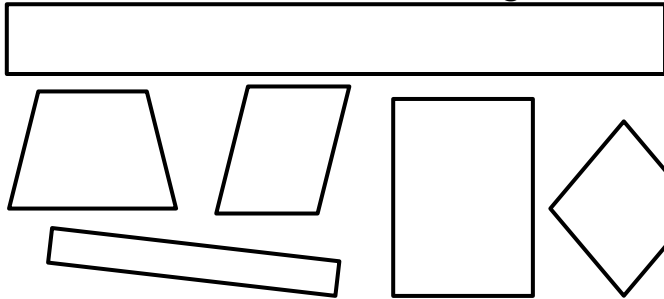
Draw a hexagon above a triangle.

Tuesday

Is the shape flat or solid?

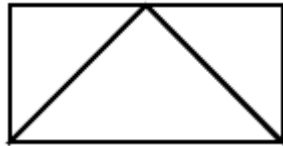


Color all of the rectangles.



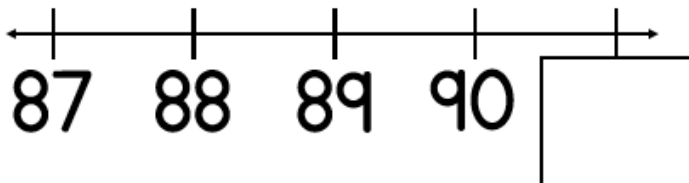
Draw a shape with 4 equal sides and 4 corners.

Timmy used some triangles to make this shape. How many triangles did he use?

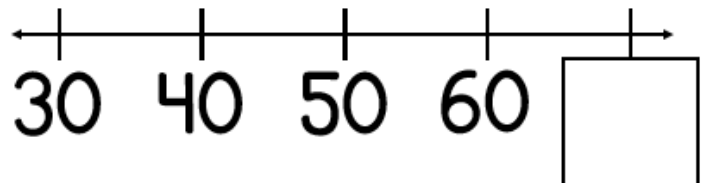


Practice counting to 100 with a family member. Once you reach 100, have your family member write their name in the box.

Fill in the missing number.



Fill in the missing number.

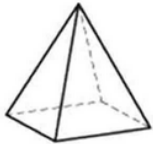
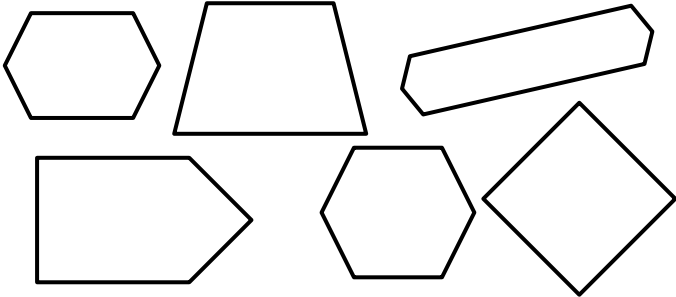

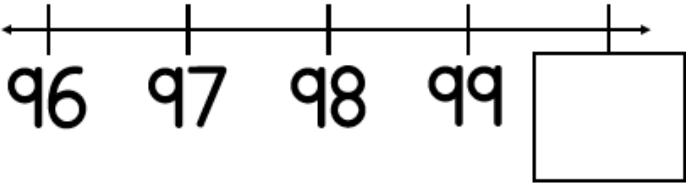
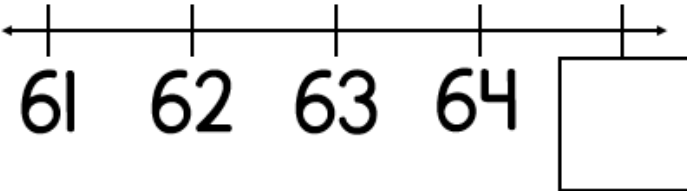




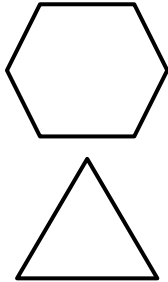



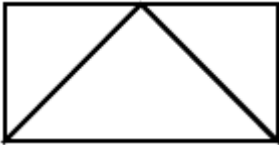
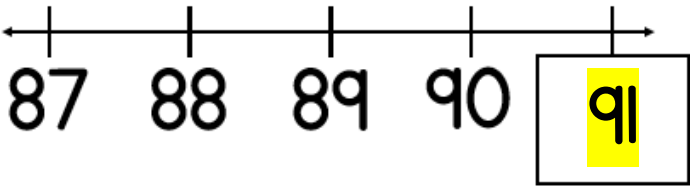
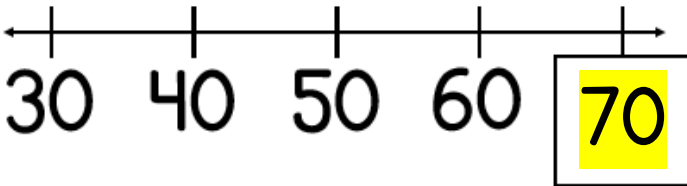


How many?



How many?

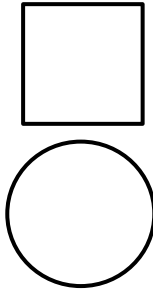


Wednesday	Thursday
<p>Draw a circle below a square.</p>	<p>Is the shape flat or solid?</p>  <p>_____</p> <p>_____</p> <p>_____</p>
<p>Color all of the hexagons.</p> 	<p>Draw two shapes with 4 sides and 4 corners.</p>
 <p>Timmy made a shape with some blocks. What shape did he make?</p> <p>_____</p> <p>_____</p> <p>_____</p>	<p>Practice counting to 100 with a family member. Once you reach 100, have your family member write their name in the box.</p> <div data-bbox="854 1079 1503 1236" style="border: 1px solid black; height: 75px; width: 100%;"></div>
<p>Fill in the missing number.</p> 	<p>Fill in the missing number.</p> 
<p>How many?</p>  <p>_____</p> <p>_____</p> <p>_____</p>	<p>How many?</p>  <p>_____</p> <p>_____</p> <p>_____</p>

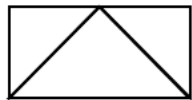
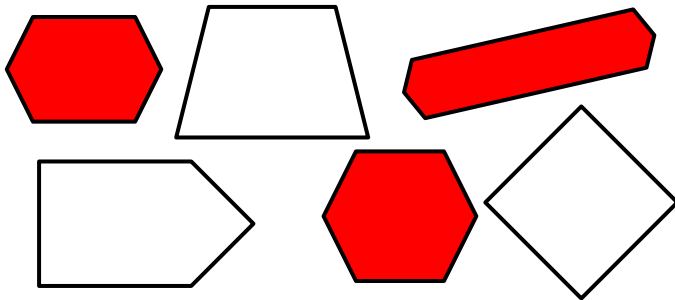
Monday	Tuesday
<p>Draw a hexagon above a triangle.</p> 	<p>Is the shape flat or solid?</p>  <p>Flat</p>
<p>Color all of the rectangles.</p> 	<p>Draw a shape with 4 equal sides and 4 corners.</p> 
<p>Timmy used some triangles to make this shape. How many triangles did he use?</p> <p>3</p> 	<p>Practice counting to 100 with a family member. Once you reach 100, have your family member write their name in the box.</p> <div data-bbox="854 1104 1503 1262" style="border: 1px solid black; height: 75px; width: 400px;"></div>
<p>Fill in the missing number.</p> 	<p>Fill in the missing number.</p> 
<p>How many?</p>  <p>15</p>	<p>How many?</p>  <p>9</p>

Wednesday

Draw a circle below a square.



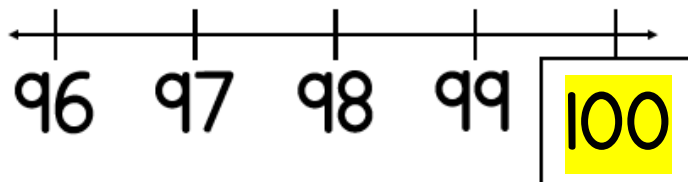
Color all of the hexagons.



Timmy made a shape with some blocks. What shape did he make?

Rectangle

Fill in the missing number.

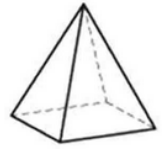


How many?




Thursday

Is the shape flat or solid?



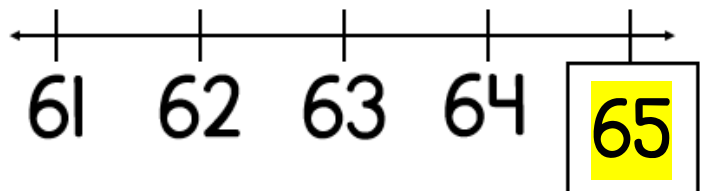
Solid

Draw two shapes with 4 sides and 4 corners.



Practice counting to 100 with a family member. Once you reach 100, have your family member write their name in the box.

Fill in the missing number.



How many?

