

Name: _____

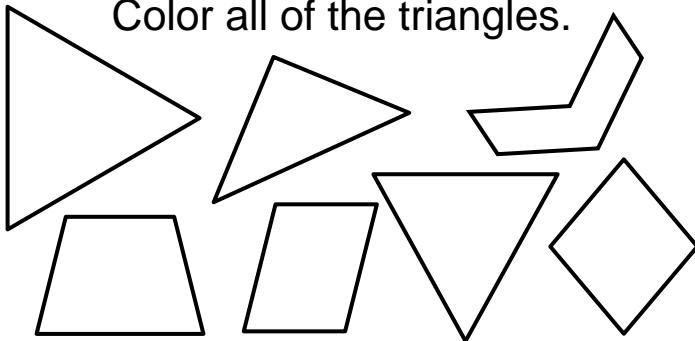
My Math Homework - Q2:6

Week of: _____


Monday

Draw a triangle inside of a circle.

Color all of the triangles.



Jamie used some shapes to make this shape. How many shapes did she use?

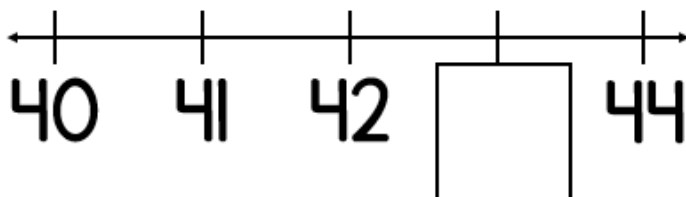


How many leaves?

13 or 14

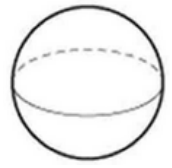


Fill in the missing number.



Tuesday

Is the shape flat or solid?

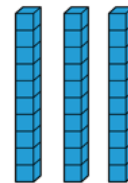


Draw a shape with 3 sides and 3 corners.

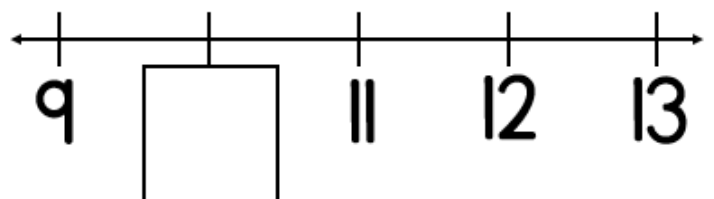
Practice counting to 100 with a family member. Once you reach 100, have your family member write their name in the box.

How many blocks?

20 or 30





Fill in the missing number.



Wednesday

Draw a square next to a rectangle.


Color all of the squares.



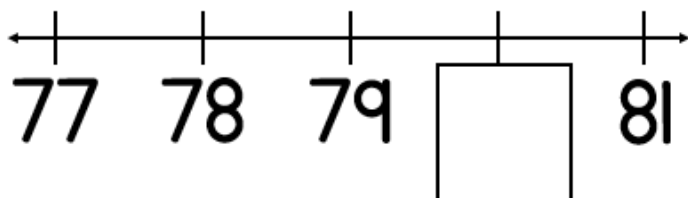
Hailey made a shape with some blocks. What shape did she make?

How many fish?

13 or 14




Fill in the missing number.



Thursday

Is the shape flat or solid?

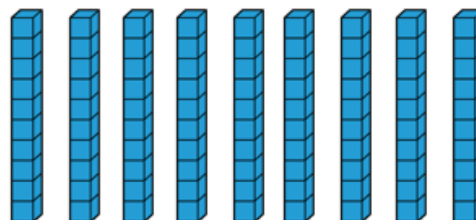


Draw a shape with 6 sides and 6 corners.

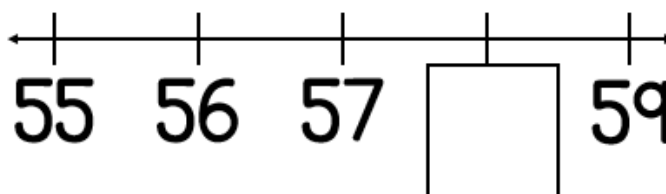
Practice counting to 100 with a family member. Once you reach 100, have your family member write their name in the box.

How many blocks?

90 or 100




Fill in the missing number.

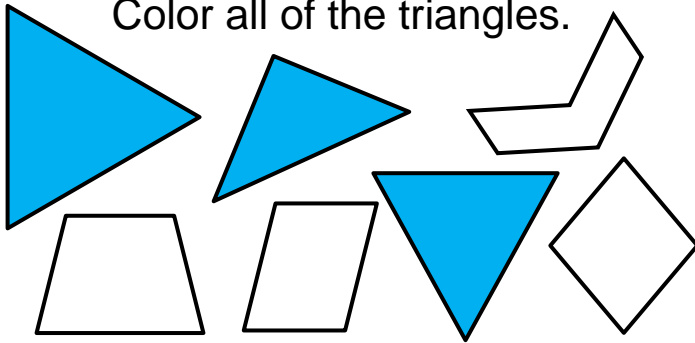


Monday

Draw a triangle inside of a circle.



Color all of the triangles.



Jamie used some shapes to make this shape. How many shapes did she use?

4

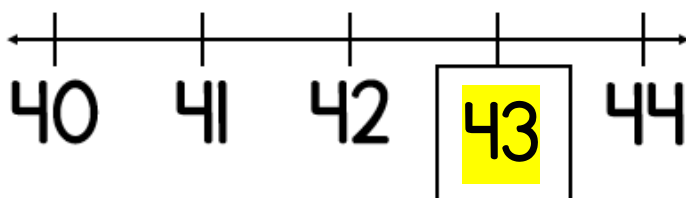


How many leaves?

13 or 14

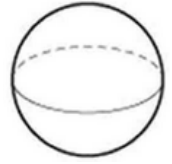


Fill in the missing number.



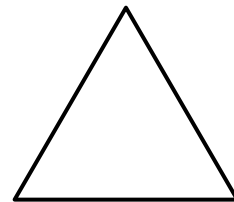
Tuesday

Is the shape flat or solid?



Solid

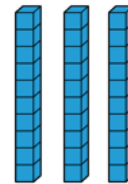
Draw a shape with 3 sides and 3 corners.



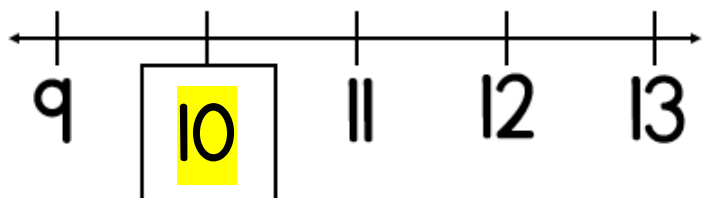
Practice counting to 100 with a family member. Once you reach 100, have your family member write their name in the box.

How many blocks?

20 or 30

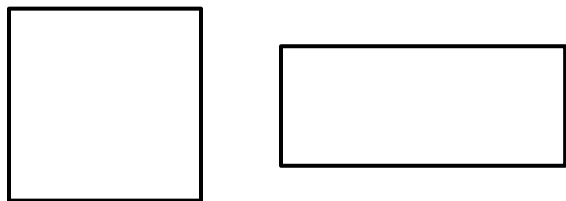


Fill in the missing number.

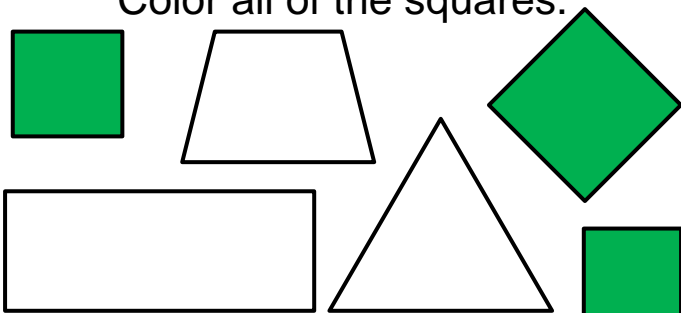


Wednesday

Draw a square next to a rectangle.



Color all of the squares.



Hailey made a shape with some blocks. What shape did she make?

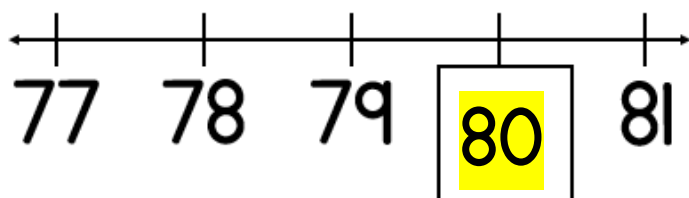
Rectangle

How many fish?

13 or 14




Fill in the missing number.



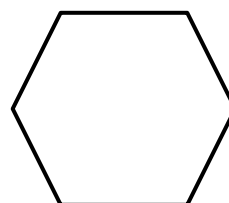
Thursday

Is the shape flat or solid?



Flat

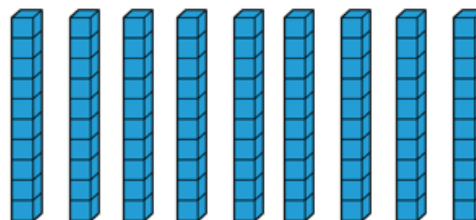
Draw a shape with 6 sides and 6 corners.



Practice counting to 100 with a family member. Once you reach 100, have your family member write their name in the box.

How many blocks?

90 or 100



Fill in the missing number.

