

Name:

My Math Homework - Q2:5

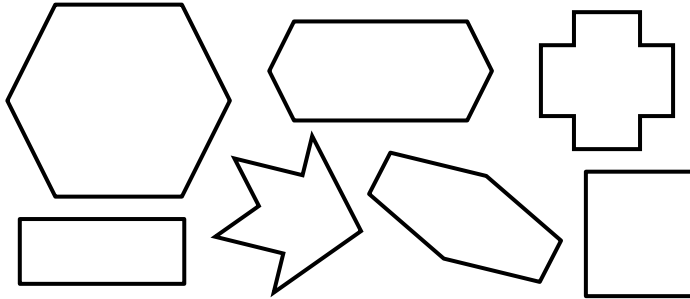
Week of:

Monday


Name the shape.



Color all of the hexagons.



James used some squares to make this rectangle. How many squares did he use?

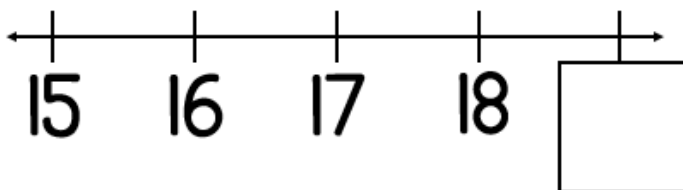


How many flowers?

11 or 12

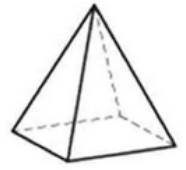


Fill in the missing number.

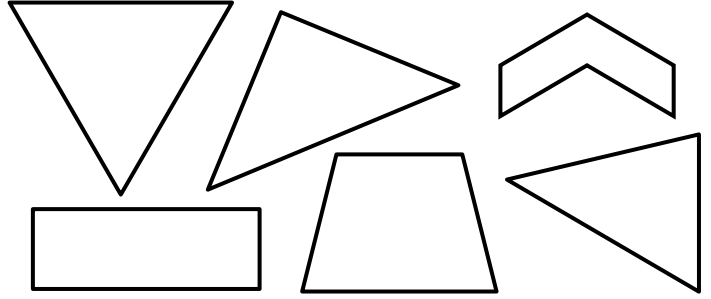


Tuesday

Is the shape flat or solid?



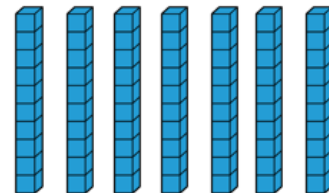
Color all the shapes with 3 sides.



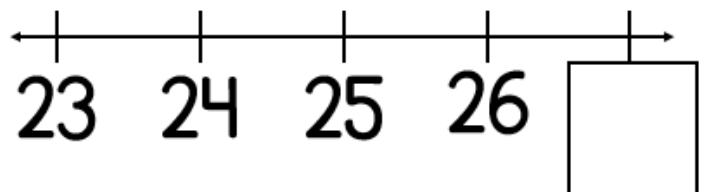
Practice counting to 100 with a family member. Once you reach 100, have your family member write their name in the box.

How many blocks?

60 or 70

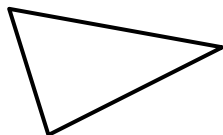


Fill in the missing number.

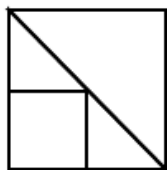



Wednesday

Name the shape.




Color all of the circles.



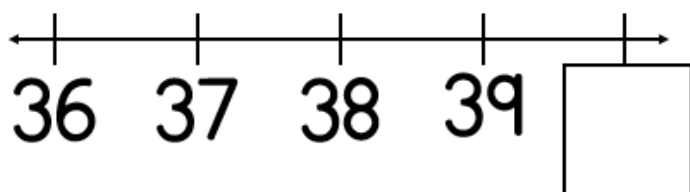
Adam made a shape with some blocks. What shape did he make?

How many penguins?

9 or 10

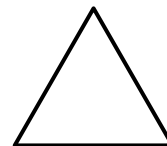


Fill in the missing number.

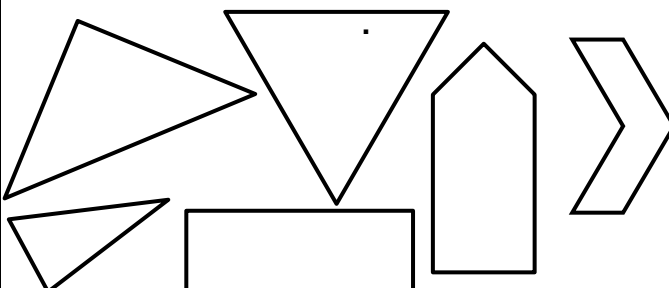


Thursday

Is the shape flat or solid?



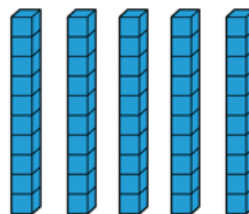
Color all the shapes with 3 corners.



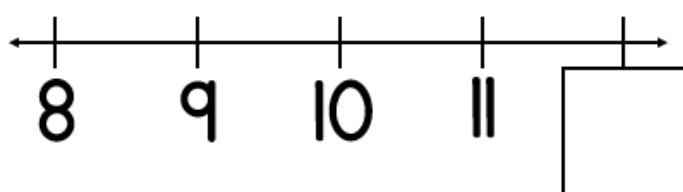
Practice counting to 100 with a family member. Once you reach 100, have your family member write their name in the box.

How many blocks?

40 or 50



Fill in the missing number.



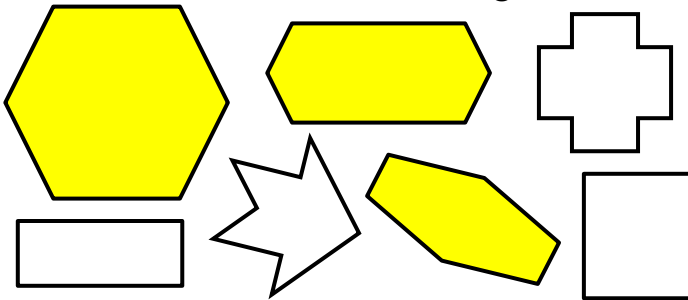
Monday

Name the shape.




Hexagon

Color all of the hexagons.



James used some squares to make this rectangle. How many squares did he use?

4

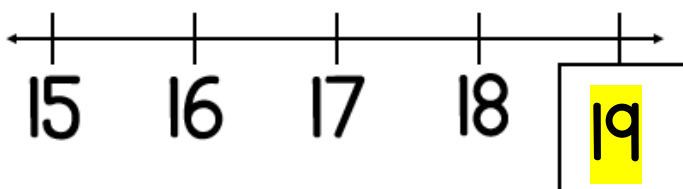


How many flowers?

11 or 12

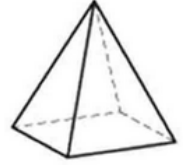


Fill in the missing number.



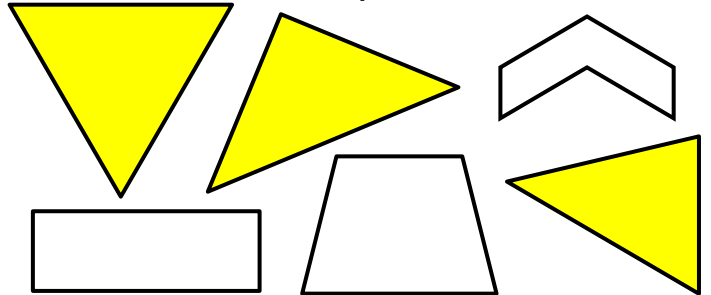
Tuesday

Is the shape flat or solid?



Solid

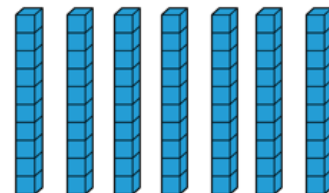
Color all the shapes with 3 sides.



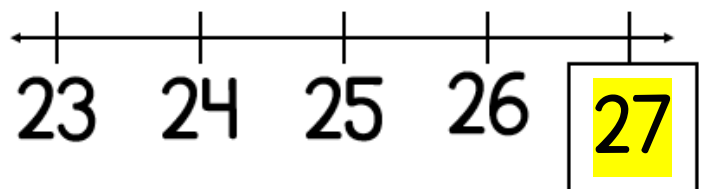
Practice counting to 100 with a family member. Once you reach 100, have your family member write their name in the box.

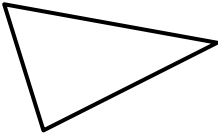
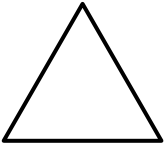

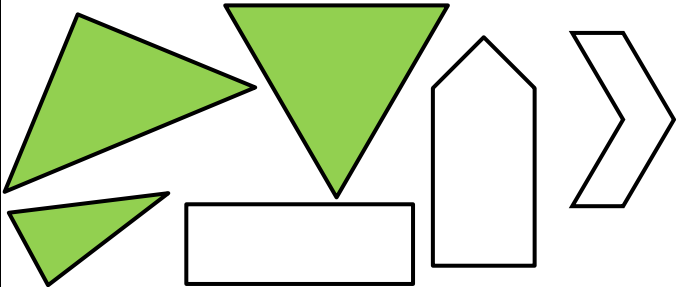
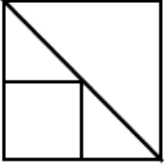

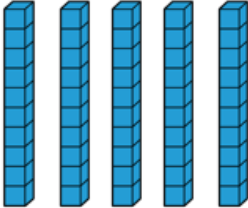
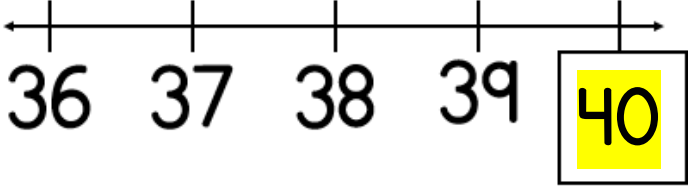
How many blocks?

60 or 70



Fill in the missing number.



Wednesday	Thursday
<p>Name the shape.</p>  <p>Triangle</p>	<p>Is the shape flat or solid?</p>  <p>Flat</p>
<p>Color all of the circles.</p> 	<p>Color all the shapes with 3 corners.</p> 
 <p>Adam made a shape with some blocks. What shape did he make?</p> <p>Square</p>	<p>Practice counting to 100 with a family member. Once you reach 100, have your family member write their name in the box.</p> <div data-bbox="857 1087 1503 1245" style="border: 1px solid black; height: 75px; width: 100%;"></div>
<p>How many penguins?</p> <p>9 or 10</p> 	<p>How many blocks?</p> <p>40 or 50</p> 
<p>Fill in the missing number.</p> 	<p>Fill in the missing number.</p> 