

Name: _____

My Math Homework - Q2:4

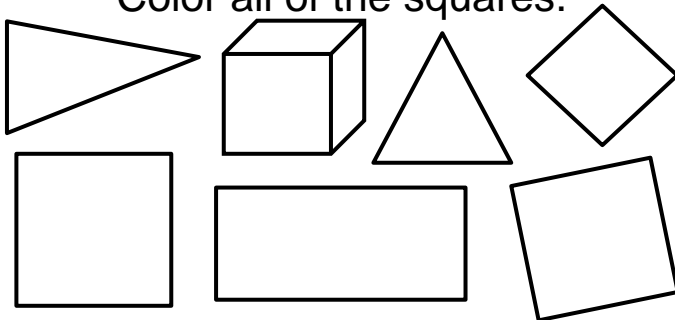
Week of: _____

Monday

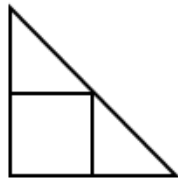
Name the shape.



Color all of the squares.



Pam used some triangles and a square to make this triangle. How many shapes did she use?



How many hearts?

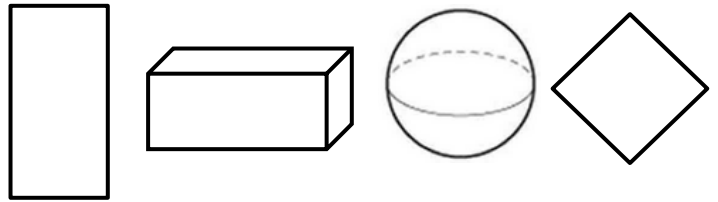
18 or 19



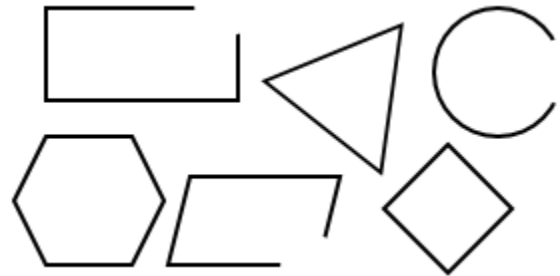
What number comes after 37?

Tuesday

Circle all the flat shapes.



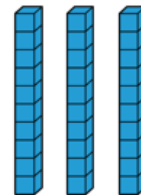
Color all the shapes that are open.



Practice counting to 100 with a family member. Once you reach 100, have your family member write their name in the box.

How many blocks?

20 or 30



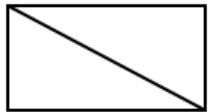
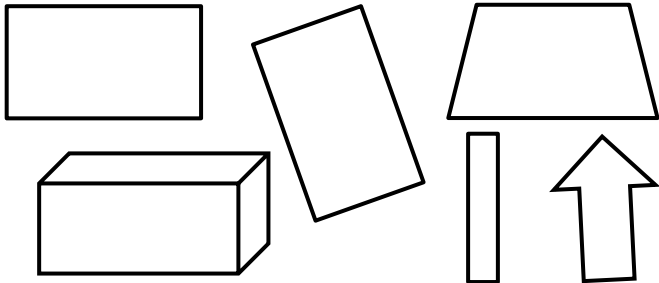
What number comes after 42?

Wednesday

Name the shape.




Color all of the rectangles.



April made a shape with some blocks. What shape did she make?

How many suns?

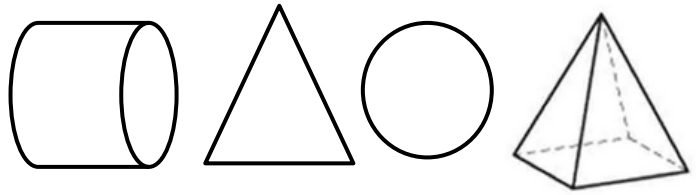
27 or 29




What number comes after 60?

Thursday

Circle all the solid shapes.



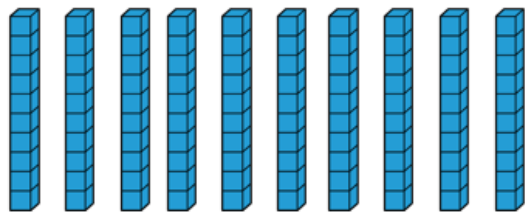
Color all the shapes that have 4 corners.



Practice counting to 100 with a family member. Once you reach 100, have your family member write their name in the box.

How many blocks?

90 or 100



What number comes after 49?

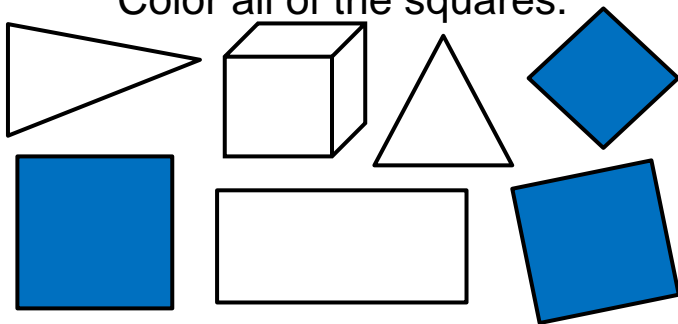
Monday

Name the shape.



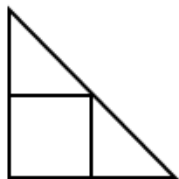
Rectangle

Color all of the squares.



Pam used some triangles and a square to make this triangle. How many shapes did she use?

3



How many hearts?

18 or 19

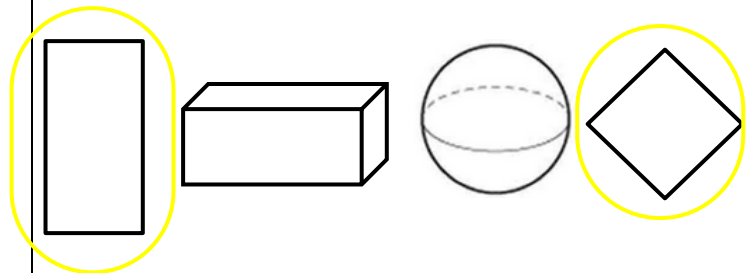


What number comes after 37?

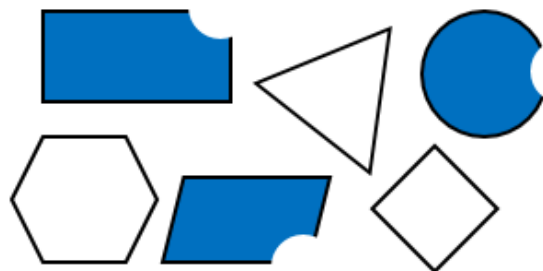
38

Tuesday

Circle all the flat shapes.



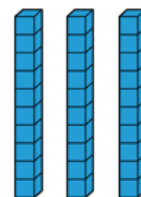
Color all the shapes that are open.



Practice counting to 100 with a family member. Once you reach 100, have your family member write their name in the box.

How many blocks?

20 or 30

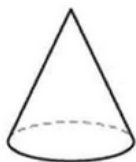


What number comes after 42?

43

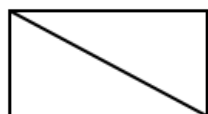
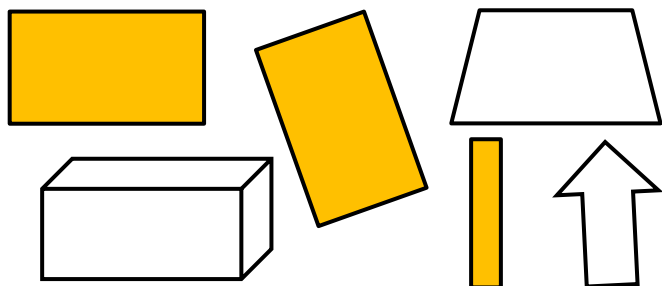
Wednesday

Name the shape.



Cone

Color all of the rectangles.




April made a shape with some blocks. What shape did she make?

Rectangle

How many suns?

27 or 29

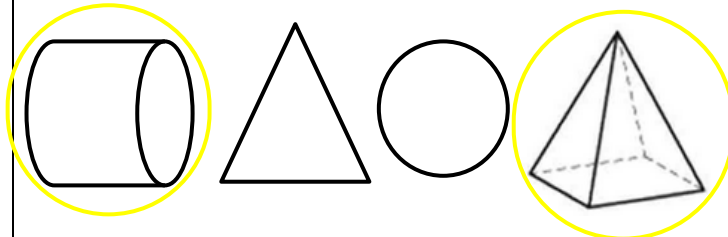


What number comes after 60?

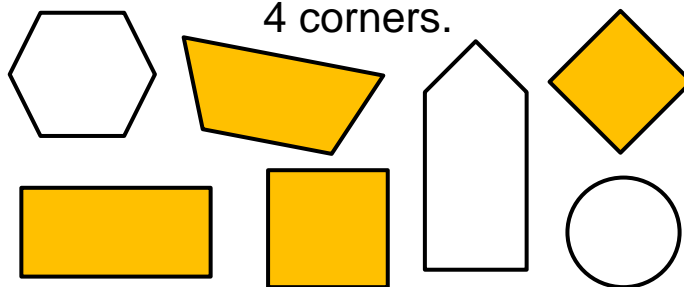
61

Thursday

Circle all the solid shapes.




Color all the shapes that have 4 corners.



Practice counting to 100 with a family member. Once you reach 100, have your family member write their name in the box.

How many blocks?

90 or **100**



What number comes after 49?

50