

Name:

My Math Homework - Q2:3


Week of:

Monday

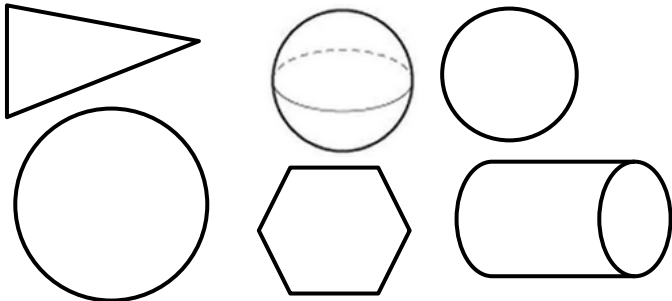
Write the number.

8
9

Name the shape.



Color all of the circles.



Owen used some triangles to make this hexagon. How many triangles did he use?



How many frogs?

12 or 15

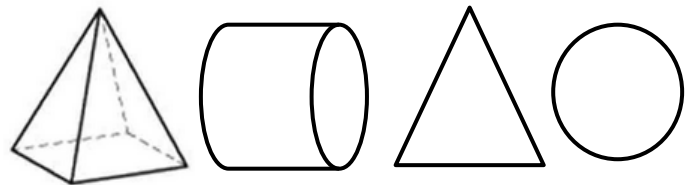


Tuesday

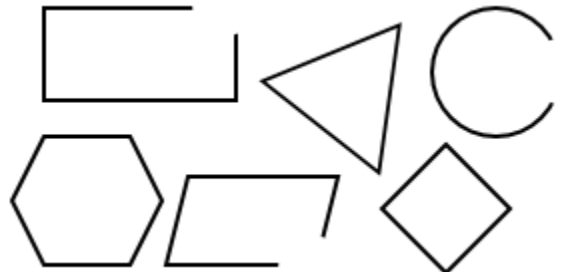
Write the number.

Two

Circle all the flat shapes.



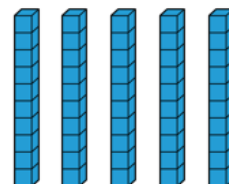
Color all the shapes that are closed.



Practice counting to 100 with a family member. Once you reach 100, have your family member write their name in the box.

How many blocks?

50 or 60



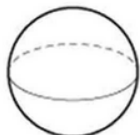
Wednesday

Write the number.

0

1

Name the shape.


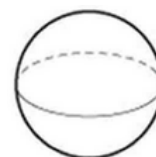



Thursday

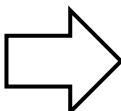
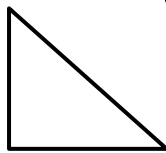
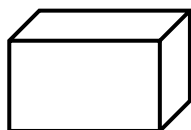
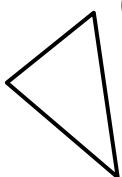
Write the number.

Three

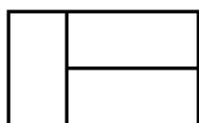
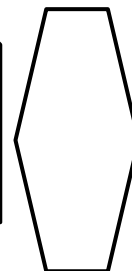

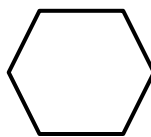
Circle all the solid shapes.



Color all of the triangles.



Color all the shapes that have 6 corners.



Jackson made a shape with some blocks. What shape did he make?

Practice counting to 100 with a family member. Once you reach 100, have your family member write their name in the box.


How many stars?

18 or 23



How many blocks?

70 or 80




Monday

Write the number.

8

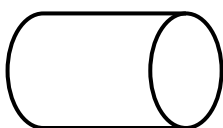
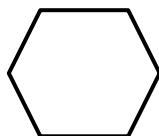


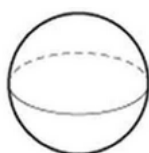
9

Name the shape.



Circle

Color all of the circles.



Owen used some triangles to make this hexagon. How many triangles did he use?

6



How many frogs?

12 or 15



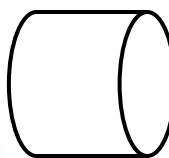
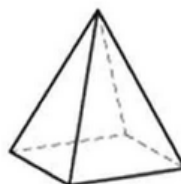


Tuesday


Write the number.

Two

Circle all the flat shapes.




Color all the shapes that are closed.



Practice counting to 100 with a family member. Once you reach 100, have your family member write their name in the box.

How many blocks?

50 or 60



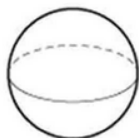
Wednesday

Write the number.

0

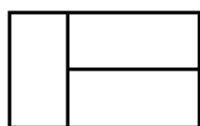
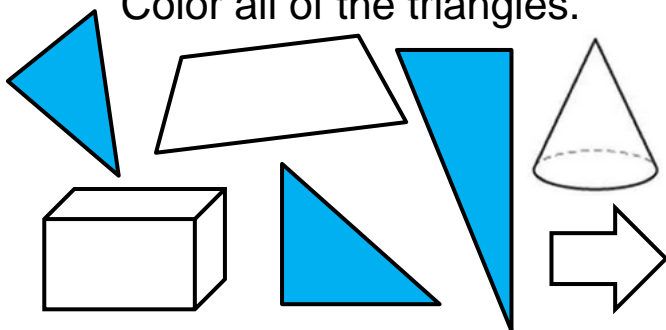
1

Name the shape.



Sphere

Color all of the triangles.



Jackson made a shape with some blocks. What shape did he make?

Rectangle

How many stars?

18 or 23

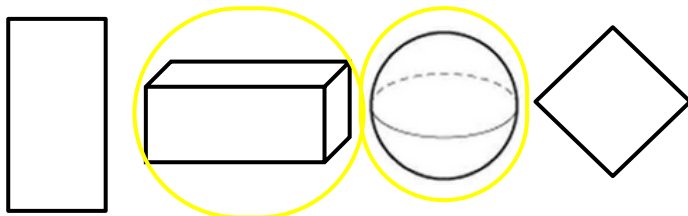


Thursday

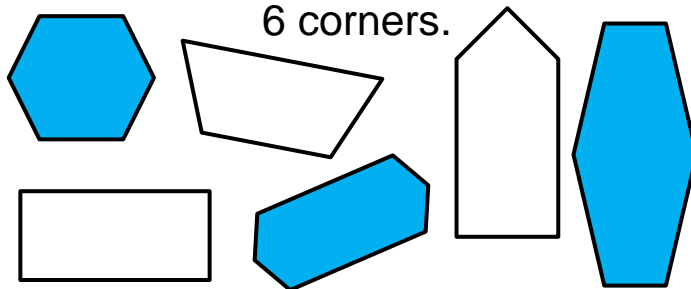
Write the number.

Three

Circle all the solid shapes.



Color all the shapes that have 6 corners.



Practice counting to 100 with a family member. Once you reach 100, have your family member write their name in the box.

How many blocks?

70 or 80

