

Name: _____

My Math Homework - Q2:2


Week of: _____

Monday

Write the number.

4
5

Name the shape.

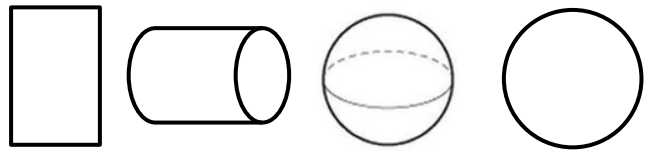


Tuesday

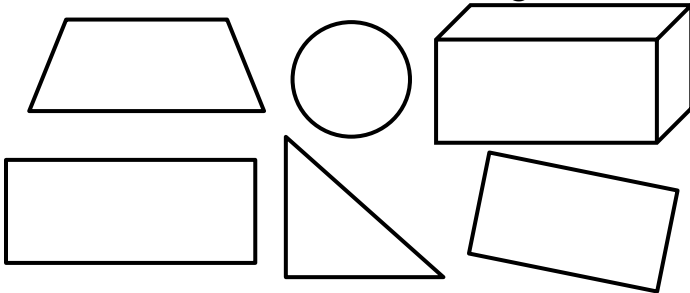
Write the number.

Zero

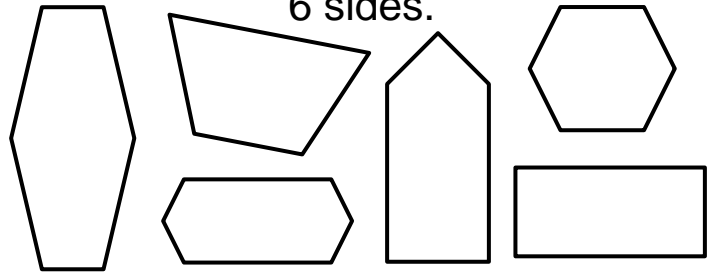
Circle all the flat shapes.



Color all of the rectangles.



Color all the shapes that have 6 sides.



Grace used some squares to make this rectangle. How many squares did she use?



Practice counting to 100 with a family member. Once you reach 100, have your family member write their name in the box.

Circle the number that goes in the empty box.

50 30 20 40

10	20	30	40	
----	----	----	----	--

Fill in the missing numbers to complete the pattern.


10 20 30
4_ 50 6_

Wednesday

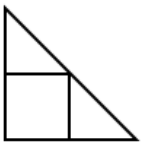
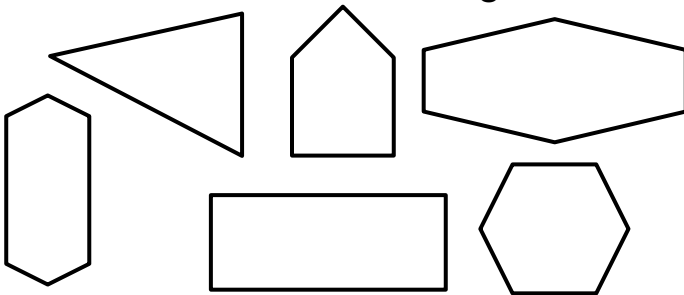
Write the number.

6
7

Name the shape.



Color all of the hexagons.



Emma made a shape with some blocks. What shape did she make?

Circle the number that goes in the empty box.

10 30 20 40

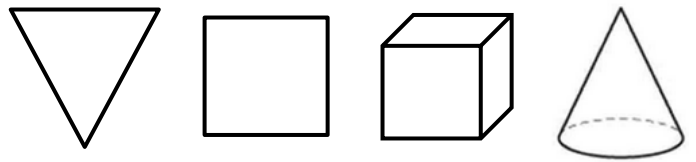
10	20		40	50
----	----	--	----	----

Thursday

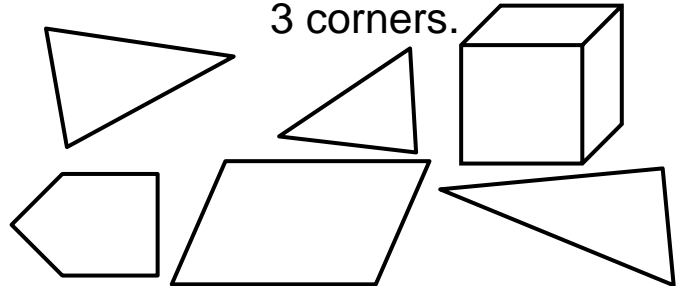
Write the number.

One

Circle all the solid shapes.



Color all the shapes that have 3 corners.



Practice counting to 100 with a family member. Once you reach 100, have your family member write their name in the box.

Fill in the missing numbers to complete the pattern.


10 20 30
0 50 0

Monday

Write the number.

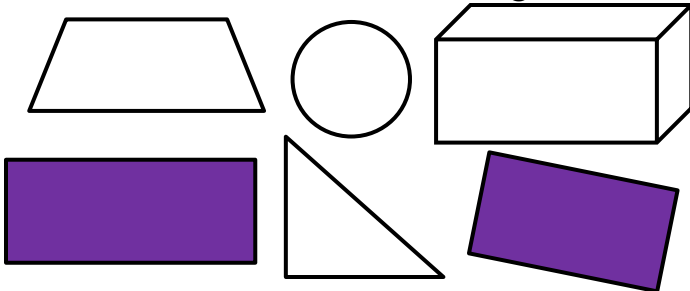
4
5

Name the shape.



Square

Color all of the rectangles.



Grace used some squares to make this rectangle. How many squares did she use?

3



Circle the number that goes in the empty box.

50 30 20 40

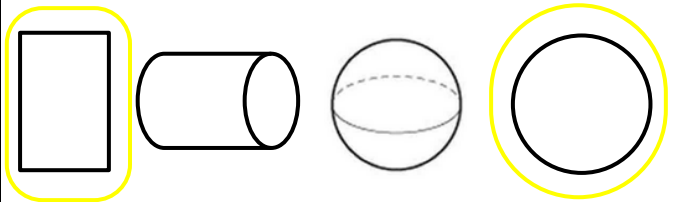
10	20	30	40	
----	----	----	----	--

Tuesday

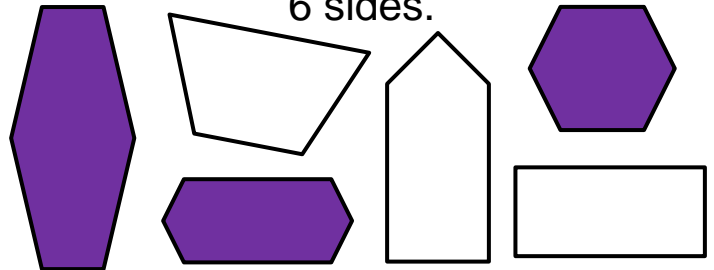
Write the number.

Zero

Circle all the flat shapes.



Color all the shapes that have 6 sides.



Practice counting to 100 with a family member. Once you reach 100, have your family member write their name in the box.

Fill in the missing numbers to complete the pattern.


10 20 30
40 50 60

Wednesday

Write the number.

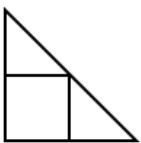
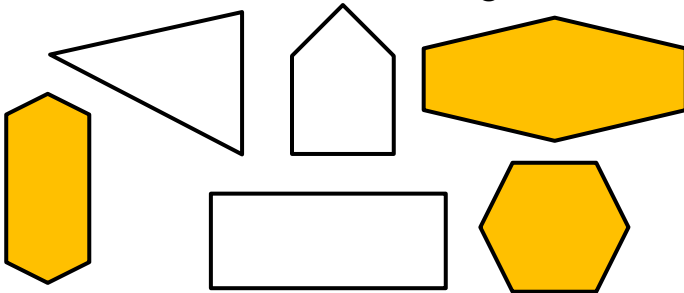
6
7

Name the shape.



Cylinder

Color all of the hexagons.



Emma made a shape with some blocks. What shape did she make?

Triangle

Circle the number that goes in the empty box.

10 **30** 20 40

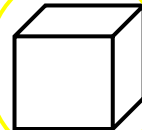

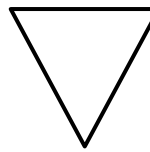
10	20		40	50
----	----	--	----	----

Thursday


Write the number.

One

Circle all the solid shapes.



Color all the shapes that have 3 corners.



Practice counting to 100 with a family member. Once you reach 100, have your family member write their name in the box.

Fill in the missing numbers to complete the pattern.

10 20 30
40 50 60